

Exam Name	Head Constable in Investigation Cadres of Punjab Police 2021
Registration Number	
Application No	
Roll No	
Name of Candidate	
Exam Date	17/09/2021
Shift	5:00 PM - 7:00 PM
Subject	Head Constable for Investigation Cadres of Punjab Police PAPER II

Section : Head Constable for Investigation Cadres Of Punjab Police PAPER II

Q.1 If 'J @ K' means 'J is the son of K', 'J * K' means 'J is the mother of K', 'J + K' means 'J is the husband of K', 'J # K' means 'J is the father of K' and 'J % K' means 'J is the daughter of K', then which of the following expression represents S as the sister in law of P?

I. $P * Q \times R + S$

II. $P @ Q = R - S$

- Ans**
- 1. Only II
 - 2. Both I and II
 - 3. Only I
 - 4. Neither I nor II

Question ID : 244113722
Status : Not Answered
Chosen Option : --

Q.2 Study the given series carefully and answer the given question.

9 2 6 7 9 2 4 3 5 8 6 2 9 1 3 4 2 8 9 8 7 5 2 1 4

Which of the following number will be obtained when the 16th number from the left end is added to the 12th number from the right end of the series?

- Ans**
- 1. 9
 - 2. 10
 - 3. 11
 - 4. 5

Question ID : 244113730
Status : Answered
Chosen Option : 4

Q.3 In the following question, select the number which can be placed at the sign of question mark (?) from the given alternatives.

7	8	15	90
6	11	13	90
3	12	16	?

- Ans**
- 1. 96
 - 2. 98
 - 3. 95
 - 4. 93

Question ID : 244113737

Status : **Not Attempted and Marked For Review**

Chosen Option : --

Q.4 In the following question, select the missing number from the given series.

27, 20, 15, 12, ?


- Ans**
- 1. 12
 - 2. 16
 - 3. 11
 - 4. 14

Question ID : 244113732

Status : **Not Attempted and Marked For Review**


Chosen Option : --

Q.5 In the following question, select the figure which can be placed at the sign of question mark (?) from the given alternatives.




Ans


✗ 1.




✗ 2.



✗ 3.



✓ 4.



Question ID : 244113726
 Status : Answered
 Chosen Option : 4

Q.6 Arrange the following words in a logical sequence.

1. Word
2. Phrase
3. Sentence
4. Paragraph
5. Letter

- Ans
- 1. 51243
 - 2. 54123
 - 3. 51324
 - 4. 51234

Question ID : 244113744
 Status : Answered
 Chosen Option : 3

Q.7 In the following question, select the missing number from the given series.

24, 18, 14, 12, ?

- Ans
- 1. 12
 - 2. 14
 - 3. 10
 - 4. 8

Question ID : 244113731
 Status : Not Answered
 Chosen Option : --

Q.8 60 ਵਿਦਿਆਰਥੀਆਂ ਦੀ ਇੱਕ ਕਤਾਰ ਵਿੱਚ, ਜਦੋਂ ਰੇਸ਼ਨ ਆਪਣੇ ਸਥਾਨ ਤੋਂ ਆਪਣੇ ਖੱਬੇ 17 ਸਥਾਨ ਸਥਾਨਾਤਰਿਤ ਹੋ ਜਾਂਦਾ ਹੈ, ਤਾਂ ਉਸਦਾ ਸਥਾਨ ਖੱਬੇ ਸਿਰੇ ਤੋਂ 16 ਵਾਂ ਹੋ ਜਾਂਦਾ ਹੈ, ਜੇਕਰ ਵਿਕਰਮ, ਰੇਸ਼ਨ ਦੇ ਮੂਲ ਸਥਾਨ ਦੇ ਸੱਜੇ 9ਵੇਂ ਸਥਾਨ ਉੱਤੇ ਸੀ, ਤਾਂ ਸੱਜੇ ਸਿਰੇ ਤੋਂ ਵਿਕਰਮ ਦਾ ਸਥਾਨ ਪਤਾ ਕਰੋ?

- Ans
- 1. 18 ਵਾਂ
 - 2. 19 ਵਾਂ
 - 3. 17 ਵਾਂ
 - 4. 20 ਵਾਂ

Question ID : 244113758
 Status : Not Attempted and Marked For Review
 Chosen Option : --

Q.9 Two figures given on the left side of (::) are related with some logic/rule/relation. Select the missing figure/figures on the right of (::) from the given alternatives based on the same logic/rule/relation.



Ans

✗ 1.



✗ 2.



✗ 3.

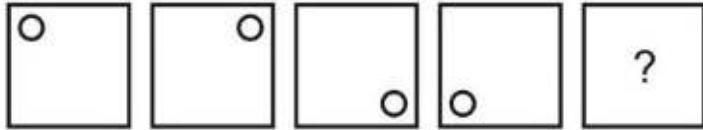


✓ 4.




Question ID : 244113751
Status : Answered
Chosen Option : 4

Q.10 In the following question, select the figure which can be placed at the sign of question mark (?) from the given alternatives.

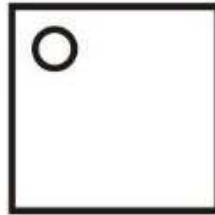


Ans


✗ 1.




✓ 2.



✗ 3.



✗ 4.



Question ID : 244113724
Status : Answered
Chosen Option : 2

Q.11 A series is given with one term missing. Select the correct alternative from the given ones that will complete the series.

RTV, RQS, RNP, RKM, ?

Ans

✓ 1. RHJ

✗ 2. RJK

✗ 3. RIK

✗ 4. SGI

Question ID : 244113741
Status : Answered
Chosen Option : 1

Q.12 Starting from a point Y, Harish walked 20 metres towards north. He turned to his left and walked 35 metres. He, then turned to his left and walked 40 metres. He, then turned to his left and walked 20 metres. He again turned to his left and walked 25 metres and reached a point Z. How far and in which direction is of Y in respect of Z?

- Ans**
- ✓ 1. $5\sqrt{10}$ km, South-East
 - ✗ 2. $5\sqrt{5}$ km, North-West
 - ✗ 3. $5\sqrt{5}$ km, South-East
 - ✗ 4. $5\sqrt{10}$ km, North-West

Question ID : 244113723
 Status : Answered
 Chosen Option : 4

Q.13 This question is based upon the following 3 letters words.

NTP, JQL, IBP, NST, PRD, VSI

All the words arranged according to alphabetical order and then each letter in each of the word is arranged according to alphabetical series. In newly formed words, what will be the difference between the place value of third letter of the third word from the right end and the second letter of the third word from the left end?

- Ans**
- ✗ 1. 10
 - ✓ 2. 1
 - ✗ 3. 5
 - ✗ 4. 6

Question ID : 244113759
 Status : Not Attempted and Marked For Review
 Chosen Option : --

Q.14 In the following question, select the related letter pair from the given alternatives.

UIZ : ADF :: ?

- Ans**
- ✗ 1. GVL : MRR
 - ✗ 2. SPC : YKJ
 - ✗ 3. WQM : CJS
 - ✓ 4. DNQ : JIW

Question ID : 244113718
 Status : Not Attempted and Marked For Review
 Chosen Option : --





Q.15 If every second Saturday and all Sundays in a month of 31 days are holidays, then how many working days are there in that month? (Month starts from Friday).

- Ans**
- 1. 25
 - 2. 24
 - 3. 22
 - 4. 23

Question ID : 244113756
Status : Answered
Chosen Option : 1

Q.16 Identify the diagram that best represents the relationship among the given classes.

Birds, Sparrow, Lion

- Ans**
- 1. 
 - 2. 
 - 3. 
 - 4. 

Question ID : 244113755
Status : Answered
Chosen Option : 1

Q.17 Two figures given on the left side of (::) are related with some logic/rule/relation. Select the missing figure/figures on the right of (::) from the given alternatives based on the same logic/rule/relation.



Ans

✓ 1.



✗ 2.



✗ 3.



✗ 4.



Question ID : 244113753

Status : **Not Attempted and Marked For Review**

Chosen Option : --

Q.18 If 'P × Q' means 'P is the brother of Q', 'P @ Q' means 'P is the wife of Q', 'P # Q' means 'P is the father of Q', 'P * Q' means 'P is the mother of Q' and 'P + Q' means 'P is the sister of Q', then with respect to A * B - C - D @ E, how is A related to E?

Ans

✗ 1. Son in law

✗ 2. Uncle

✗ 3. Father

✓ 4. Father in law

Question ID : 244113721

Status : **Not Answered**

Chosen Option : --

Q.19 In the following question below are given some statements followed by some conclusions based on those statements. Taking the given statements to be true even if they seem to be at variance from commonly known facts. Read all the conclusions and then decide which of the given conclusion logically follows the given statements.

Statements:

I. Some J are C.

II. No C is X.

Conclusion:

I. No X is J.

II. No X is C.

III. Some C are not X.

- Ans**
- 1. Both conclusions I and III follows
 - 2. Both conclusions II and III follows
 - 3. Only conclusion III follows
 - 4. All conclusion follows

Question ID : 244113739
Status : Answered
Chosen Option : 4

Q.20 In the following question, select the number which can be placed at the sign of question mark (?) from the given alternatives.

9	81	729
4	16	64
3	9	?

- Ans**
- 1. 10
 - 2. 33
 - 3. 8
 - 4. 27

Question ID : 244113736
Status : Answered
Chosen Option : 4

Q.21 In a certain code language, 'PEN' is called as 'MOBILE', 'MOBILE' is called as 'PLANTS', 'PLANTS' is called as 'GLOVES', 'GLOVES' is called as 'LIGHT', 'LIGHT' is called as 'YELLOW'. Who gives us oxygen?

- Ans**
- 1. Plants
 - 2. Gloves
 - 3. Yellow
 - 4. Light

Question ID : 244113745
Status : Answered
Chosen Option : 2

Q.22 Which of the following word will appear fourth when they are arranged in order of dictionary?

- Ans**
- 1. Gamer
 - 2. Gain
 - 3. Gamps
 - 4. Gable

Question ID : 244113743

Status : Answered

Chosen Option : 3

Q.23 In the following question, select the figure which can be placed at the sign of question mark (?) from the given alternatives.



Ans

- 1.
- 2.
- 3.
- 4.

Question ID : 244113727

Status : Answered

Chosen Option : 4

Q.24 In the following question, select the figure which can be placed at the sign of question mark (?) from the given alternatives.



Ans

✓ 1.



✗ 2.



✗ 3.



✗ 4.



Question ID : 244113750
Status : Answered
Chosen Option : 1

Q.25 In a certain code language, 'RED' is called as 'YELLOW', 'YELLOW' is called as 'ORANGE', 'ORANGE' is called as 'PINK', 'PINK' is called as 'GREEN', 'GREEN' is called as 'BLUE'. What is colour of ladyfinger?

Ans

✓ 1. Blue

✗ 2. Pink

✗ 3. Red

✗ 4. Green

Question ID : 244113746
Status : Answered
Chosen Option : 1

Q.26 In the following question, select the figure which can be placed at the sign of question mark (?) from the given alternatives.



Ans

✗ 1.



✗ 2.



✓ 3.



✗ 4.



Question ID : 244113725

Status : Answered

Chosen Option : 2

Q.27 A series is given with one term missing. Select the correct alternative from the given ones that will complete the series.

DGX, ADC, XAH, UXM, ?

Ans

✗ 1. RUS

✓ 2. RUR

✗ 3. QUR

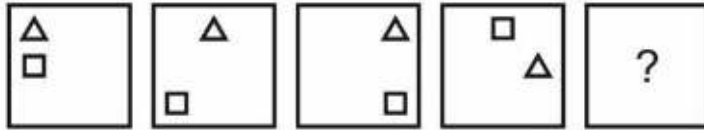
✗ 4. QUS

Question ID : 244113716

Status : Not Attempted and
Marked For Review

Chosen Option : --

Q.28 In the following question, select the figure which can be placed at the sign of question mark (?) from the given alternatives.




Ans

✗ 1.



✗ 2.



✓ 3.



✗ 4.



Question ID : 244113728

Status : Not Attempted and
Marked For Review

Chosen Option : --

Q.29 In the following question below are given some statements followed by some conclusions based on those statements. Taking the given statements to be true even if they seem to be at variance from commonly known facts. Read all the conclusions and then decide which of the given conclusion logically follows the given statements.

Statements:

I. Some garden are red.

II. No white is red.

Conclusion:

I. No red is white.

II. Some red are garden.

III. No garden is white.

- Ans**
- 1. Both conclusions II and III follows
 - 2. Both conclusions I and II follows
 - 3. Only conclusion II follows
 - 4. Only conclusion III follows

Question ID : 244113738
Status : Answered
Chosen Option : 2

Q.30 Prateek went 25 km to the west from his office, he turned to the left and walked 30 km. He, then turned to the east and walked 50 km and finally, he turned to the left and walked 50 km. How far was his office from finishing point?

- Ans**
- 1. 20 km
 - 2. 25 km
 - 3. 15 km
 - 4. 30 km

Question ID : 244113749
Status : Answered
Chosen Option : 2

Q.31 Which of the following statement is correct?

I. There are 25 leap years in the first 100 years of the calendar.

II. There are 97 leap years in the first 400 years of the calendar.

- Ans**
- 1. Neither I nor II
 - 2. Only II
 - 3. Both I and II
 - 4. Only I

Question ID : 244113729
Status : Answered
Chosen Option : 2

Q.32 A series is given with one term missing. Select the correct alternative from the given ones that will complete the series.

UYJ, WCD, YGX, AKR, ?

- Ans**
- 1. DOL
 - 2. COL
 - 3. COM
 - 4. CPL

Question ID : 244113742
 Status : Answered
 Chosen Option : 2


Q.33 A series is given with one term missing. Select the correct alternative from the given ones that will complete the series.

MPKQ, RSPO, WVUM, BYZK, ?

- Ans**
- 1. GBFI
 - 2. GCEI
 - 3. GBEJ
 - 4. GBEI

Question ID : 244113717
 Status : Not Answered
 Chosen Option : --

Q.34 Two figures given on the left side of (:) are related with some logic/rule/relation. Select the missing figure/figures on the right of (:) from the given alternatives based on the same logic/rule/relation.



- Ans**
- 1.
 - 2.
 - 3.
 - 4.

Question ID : 244113754
 Status : Not Answered
 Chosen Option : --

Q.35 In the following question, select the missing number from the given series.

16, 22, 32, 46, ?

- Ans**
- 1. 58
 - 2. 62
 - 3. 60
 - 4. 64

Question ID : **244113733**
Status : **Answered**
Chosen Option : **4**

Q.36 In the following question, select the related number from the given alternatives.

25 : 628 :: 27 : ?

- Ans**
- 1. 672
 - 2. 732
 - 3. 864
 - 4. 640

Question ID : **244113735**
Status : **Answered**
Chosen Option : **2**

Q.37 In a certain code language, 'GAMUT' is written as 'GFNZT'. What is the code for 'TAROT' in that code language?

- Ans**
- 1. GLZIG
 - 2. GILZG
 - 3. GLIGZ
 - 4. GLIZG

Question ID : **244113720**
Status : **Not Answered**
Chosen Option : --

Q.38 In a certain code language, 'PRIMA' is written as 'SEAJH'. What is the code for 'SENOR' in that code language?

- Ans**
- 1. JGFKW
 - 2. JFGWK
 - 3. JFGKW
 - 4. JGFWK

Question ID : **244113747**
Status : **Not Answered**
Chosen Option : --

Q.39 In a certain code language, 'NATURE' is called as 'ROAD', 'ROAD' is called as 'BIRD', 'BIRD' is called as 'PLANTS', 'PLANTS' is called as 'KEYS', 'KEYS' is called as 'LOCKS'. Where does vehicles move?

- Ans**
- 1. PLANTS
 - 2. ROAD
 - 3. LOCKS
 - 4. BIRD

Question ID : 244113719
Status : Answered
Chosen Option : 4

Q.40 A series is given with one term missing. Select the correct alternative from the given ones that will complete the series.

SV, PS, MP, JM, ?

- Ans**
- 1. HI
 - 2. EH
 - 3. GJ
 - 4. HI

Question ID : 244113740
Status : Answered
Chosen Option : 3

Q.41 A boy goes 8 km to the west, then he turns to the right and goes 14 km, then he turns to the left and goes 8 km. In which direction is starting point from finishing point?

- Ans**
- 1. South-West
 - 2. North-West
 - 3. North-East
 - 4. South-East

Question ID : 244113748
Status : Answered
Chosen Option : 2

Q.42 In the following question, select the related number from the given alternatives.

4 : 272 :: 5 : ?

- Ans**
- 1. 678
 - 2. 728
 - 3. 650
 - 4. 522

Question ID : 244113734
Status : Not Answered
Chosen Option : --

Q.43 In the month of January 1999, on which date it was a Friday?

- Ans**
- 1. 1st
 - 2. 16th
 - 3. 10th
 - 4. 29th

Question ID : 244113757
Status : Not Answered
Chosen Option : --

Q.44 In the following question below are given some statements followed by some conclusions based on those statements. Taking the given statements to be true even if they seem to be at variance from commonly known facts. Read all the conclusions and then decide which of the given conclusion logically follows the given statements.

Statements:

I. Some G are M.

II. No M is T.

Conclusion:

I. Some M are not G.

II. Some T are not M.

III. Some M are G.

- Ans**
- 1. All conclusion follows
 - 2. Both conclusions I and III follows
 - 3. Only conclusion III follows
 - 4. Both conclusions II and III follows

Question ID : 244113715
Status : Not Answered
Chosen Option : --

Q.45 Two figures given on the left side of (::) are related with some logic/rule/relation. Select the missing figure/figures on the right of (::) from the given alternatives based on the same logic/rule/relation.



Ans

✗ 1.



✗ 2.



✗ 3.



✓ 4.



Question ID : 244113752

Status : Not Answered

Chosen Option : --

Comprehension:

Human beings are rational beings. They by virtue of being humans possess certain basic and inalienable rights which are known as Human Rights. Since these rights are available to them by virtue of being human, as such they come into existence at the time of their birth. The Constitution of India as adopted in 1950 provides certain rights to its citizens known as the Fundamental Rights (Part-3, article 14-35). These rights are similar to those rights which are provided in Universal Declaration of Human Rights and the rights provided in International covenant on civil and political rights and International rights on social, economic and cultural rights. These rights emanate from sense of justice.

Human rights are 'interdependent' and 'interrelated', thus the right to food is related to the right to work, the right to health, the right to social services, and most importantly, the rights of women. Certain rights such as freedom from discrimination are crosscutting and intimately related to the enjoyment of several other human rights. However, the 'indivisibility' of priorities and inter-relatedness of human rights do not preclude the setting of priorities in human rights programming.

John Stuart Mill wrote 'the only freedom which deserves the name is that of pursuing our own good in our own way, so long as we do not attempt to deprive others of theirs, or impede their efforts to obtain it. Each is the proper guardian of his own health, whether bodily, or mental and spiritual'. This rhetoric of rights is taken up by the international declarations and treaties on human rights. Although English law does not talk in terms of rights, individuals, whether they are patients, trade unionists or protesters, inevitably revert to such language. The image of human rights is, as Tom Campbell points out, 'morally compelling and attractively uncompromising'; practicality, the rights of others, restraints on the public purse and not least public opinion do, however, require compromise and each of the essays explores the reality or validity of a claimed right.

SubQuestion No : 46

Q.46 Which part of the Indian Constitution covers fundamental rights?

Ans ✓ 1. Part-3

✗ 2. Part-2

✗ 3. Part-4

✗ 4. Part-1

Question ID : 244113762

Status : Answered

Chosen Option : 1

Comprehension:

Human beings are rational beings. They by virtue of being humans possess certain basic and inalienable rights which are known as Human Rights. Since these rights are available to them by virtue of being human, as such they come into existence at the time of their birth. The Constitution of India as adopted in 1950 provides certain rights to its citizens known as the Fundamental Rights (Part-3, article 14-35). These rights are similar to those rights which are provided in Universal Declaration of Human Rights and the rights provided in International covenant on civil and political rights and International rights on social, economic and cultural rights. These rights emanate from sense of justice.

Human rights are 'interdependent' and 'interrelated', thus the right to food is related to the right to work, the right to health, the right to social services, and most importantly, the rights of women. Certain rights such as freedom from discrimination are crosscutting and intimately related to the enjoyment of several other human rights. However, the 'indivisibility' of priorities and inter-relatedness of human rights do not preclude the setting of priorities in human rights programming.

John Stuart Mill wrote 'the only freedom which deserves the name is that of pursuing our own good in our own way, so long as we do not attempt to deprive others of theirs, or impede their efforts to obtain it. Each is the proper guardian of his own health, whether bodily, or mental and spiritual'. This rhetoric of rights is taken up by the international declarations and treaties on human rights. Although English law does not talk in terms of rights, individuals, whether they are patients, trade unionists or protesters, inevitably revert to such language. The image of human rights is, as Tom Campbell points out, 'morally compelling and attractively uncompromising'; practicality, the rights of others, restraints on the public purse and not least public opinion do, however, require compromise and each of the essays explores the reality or validity of a claimed right.

SubQuestion No : 47

Q.47 Fundamental rights originate from the sense of _____.

- Ans** 1. justice
 2. money
 3. fraternity
 4. inequality

Question ID : **244113764**
Status : **Answered**
Chosen Option : **1**

Comprehension:

Human beings are rational beings. They by virtue of being humans possess certain basic and inalienable rights which are known as Human Rights. Since these rights are available to them by virtue of being human, as such they come into existence at the time of their birth. The Constitution of India as adopted in 1950 provides certain rights to its citizens known as the Fundamental Rights (Part-3, article 14-35). These rights are similar to those rights which are provided in Universal Declaration of Human Rights and the rights provided in International covenant on civil and political rights and International rights on social, economic and cultural rights. These rights emanate from sense of justice.

Human rights are 'interdependent' and 'interrelated', thus the right to food is related to the right to work, the right to health, the right to social services, and most importantly, the rights of women. Certain rights such as freedom from discrimination are crosscutting and intimately related to the enjoyment of several other human rights. However, the 'indivisibility' of priorities and inter-relatedness of human rights do not preclude the setting of priorities in human rights programming.

John Stuart Mill wrote 'the only freedom which deserves the name is that of pursuing our own good in our own way, so long as we do not attempt to deprive others of theirs, or impede their efforts to obtain it. Each is the proper guardian of his own health, whether bodily, or mental and spiritual'. This rhetoric of rights is taken up by the international declarations and treaties on human rights. Although English law does not talk in terms of rights, individuals, whether they are patients, trade unionists or protesters, inevitably revert to such language. The image of human rights is, as Tom Campbell points out, 'morally compelling and attractively uncompromising'; practicality, the rights of others, restraints on the public purse and not least public opinion do, however, require compromise and each of the essays explores the reality or validity of a claimed right.

SubQuestion No : 48

Q.48 Human rights are _____.

- Ans**
- 1. Interrelated
 - 2. Interdependent
 - 3. Interrelated and Interdependent
 - 4. Independent

Question ID : **244113761**
Status : **Answered**
Chosen Option : **3**

Comprehension:

Human beings are rational beings. They by virtue of being humans possess certain basic and inalienable rights which are known as Human Rights. Since these rights are available to them by virtue of being human, as such they come into existence at the time of their birth. The Constitution of India as adopted in 1950 provides certain rights to its citizens known as the Fundamental Rights (Part-3, article 14-35). These rights are similar to those rights which are provided in Universal Declaration of Human Rights and the rights provided in International covenant on civil and political rights and International rights on social, economic and cultural rights. These rights emanate from sense of justice.

Human rights are 'interdependent' and 'interrelated', thus the right to food is related to the right to work, the right to health, the right to social services, and most importantly, the rights of women. Certain rights such as freedom from discrimination are crosscutting and intimately related to the enjoyment of several other human rights. However, the 'indivisibility' of priorities and inter-relatedness of human rights do not preclude the setting of priorities in human rights programming.

John Stuart Mill wrote 'the only freedom which deserves the name is that of pursuing our own good in our own way, so long as we do not attempt to deprive others of theirs, or impede their efforts to obtain it. Each is the proper guardian of his own health, whether bodily, or mental and spiritual'. This rhetoric of rights is taken up by the international declarations and treaties on human rights. Although English law does not talk in terms of rights, individuals, whether they are patients, trade unionists or protesters, inevitably revert to such language. The image of human rights is, as Tom Campbell points out, 'morally compelling and attractively uncompromising'; practicality, the rights of others, restraints on the public purse and not least public opinion do, however, require compromise and each of the essays explores the reality or validity of a claimed right.

SubQuestion No : 49

Q.49 John Stuart Mill wrote 'the only freedom which deserves the name is that of pursuing our own good in our own way, so long as we do not attempt to deprive others of theirs, or impede their efforts to obtain it. This statement refers to?

- Ans**
- 1. One should pursue his dreams
 - 2. One should try to follow his heart
 - 3. One should follow his guts
 - 4. One should pursue things for own good in his own way without Depriving others of their.

Question ID : 244113763

Status : Answered

Chosen Option : 4

Comprehension:

Human beings are rational beings. They by virtue of being humans possess certain basic and inalienable rights which are known as Human Rights. Since these rights are available to them by virtue of being human, as such they come into existence at the time of their birth. The Constitution of India as adopted in 1950 provides certain rights to its citizens known as the Fundamental Rights (Part-3, article 14-35). These rights are similar to those rights which are provided in Universal Declaration of Human Rights and the rights provided in International covenant on civil and political rights and International rights on social, economic and cultural rights. These rights emanate from sense of justice.

Human rights are 'interdependent' and 'interrelated', thus the right to food is related to the right to work, the right to health, the right to social services, and most importantly, the rights of women. Certain rights such as freedom from discrimination are crosscutting and intimately related to the enjoyment of several other human rights. However, the 'indivisibility' of priorities and inter-relatedness of human rights do not preclude the setting of priorities in human rights programming.

John Stuart Mill wrote 'the only freedom which deserves the name is that of pursuing our own good in our own way, so long as we do not attempt to deprive others of theirs, or impede their efforts to obtain it. Each is the proper guardian of his own health, whether bodily, or mental and spiritual'. This rhetoric of rights is taken up by the international declarations and treaties on human rights. Although English law does not talk in terms of rights, individuals, whether they are patients, trade unionists or protesters, inevitably revert to such language. The image of human rights is, as Tom Campbell points out, 'morally compelling and attractively uncompromising'; practicality, the rights of others, restraints on the public purse and not least public opinion do, however, require compromise and each of the essays explores the reality or validity of a claimed right.

SubQuestion No : 50

Q.50 The Constitution of India was adopted in _____.

- Ans**
- 1. 1947
 - 2. 1991
 - 3. 1965
 - 4. 1950

Question ID : 244113765
Status : Answered
Chosen Option : 4

Q.51 Which of the following devices is used to convert graphical data into digital form?

- Ans**
- 1. Track Ball
 - 2. Touch Screen
 - 3. Joystick
 - 4. Digitizer

Question ID : 244113767
Status : Answered
Chosen Option : 4

Q.52 Utilizingwe can save time to perform activities in Microsoft Word that you would regularly begin other actions to perform.

- Ans**
- 1. Smart Tags
 - 2. Comments
 - 3. Mail Merge
 - 4. Hyperlinks

Question ID : 244113791
Status : Answered
Chosen Option : 3

Q.53 Caps lock key is also known as _____.

- Ans 1. Toggle key
 2. Punctuation key
 3. Alphanumeric key
 4. Control key

Question ID : 244113771
Status : Answered
Chosen Option : 1

Q.54 What is the main function of power supply in a computer system?

- Ans 1. Runs the Software
 2. Changes the current from one form to another
 3. Blocks the current conversion
 4. Deactivates the system parts

Question ID : 244113766
Status : Answered
Chosen Option : 2

Q.55 In which type of topology, even if a single computer fails, the entire system keeps on working.

- Ans 1. Ring
 2. Mesh
 3. Bus
 4. Star

Question ID : 244113778
Status : Not Answered
Chosen Option : --

Q.56 Which among the following is a third generation computer?

- Ans 1. STAR 1000
 2. TDC-316
 3. Apple Macintosh
 4. CRAY-1

Question ID : 244113793
Status : Not Answered
Chosen Option : --

Q.57 Each country linked to the Web has a _____ letter top-level domain.

- Ans 1. two
 2. four
 3. three
 4. one

Question ID : 244113779
Status : Not Answered
Chosen Option : --

Q.58 _____ are shapes that are designed to represent the relationship between things or people.

- Ans**
- 1. Tables
 - 2. SmartArt graphics
 - 3. Slide sorter
 - 4. Slide layouts

Question ID : 244113776
Status : Not Answered
Chosen Option : --

Q.59 When we select a group of cells, the first cell we click is designated as the?

- Ans**
- 1. current cell
 - 2. copied cell
 - 3. selected cell
 - 4. active cell

Question ID : 244113768
Status : Answered
Chosen Option : 4

Q.60 Which of the following is used to measure the enablers of mobile internet connectivity across the countries?

- Ans**
- 1. Mobile Connector Index
 - 2. Mobile Network Index
 - 3. Mobile Connectivity Index
 - 4. Mobile Internet Index

Question ID : 244113770
Status : Not Answered
Chosen Option : --

Q.61 What describes the shape and layout of the motherboard?

- Ans**
- 1. Cache
 - 2. Form factor
 - 3. Clock speed
 - 4. Transistors

Question ID : 244113783
Status : Answered
Chosen Option : 4

Q.62 tool is utilized to to match colors on your slide in Microsoft Powerpoint.

- Ans**
- 1. Slide show
 - 2. Design
 - 3. Review
 - 4. Eyedropper

Question ID : 244113792
Status : Answered
Chosen Option : 4

Q.63 What is unlocked by the process that locks it?

- Ans**
- 1. Mutex
 - 2. Spinlock
 - 3. Binary Semaphore
 - 4. Semaphore

Question ID : **244113787**
Status : **Not Answered**
Chosen Option : --

Q.64 _____ is at the heart of the design of the phone.

- Ans**
- 1. SIM
 - 2. Digital Signal Processor
 - 3. USIM
 - 4. Control Processor

Question ID : **244113781**
Status : **Not Attempted and Marked For Review**
Chosen Option : --

Q.65 Which of the following is not a social media platform?

- Ans**
- 1. Facebook
 - 2. Twitter
 - 3. Google
 - 4. Instagram

Question ID : **244113780**
Status : **Answered**
Chosen Option : **3**

Q.66 Which one among the following is the first thing that the BIOS chip does?

- Ans**
- 1. Power-on Self Rest
 - 2. Power-on Set Test
 - 3. Power-On Self Test
 - 4. Power-Off Self Test

Question ID : **244113769**
Status : **Not Answered**
Chosen Option : --

Q.67 Which among the following is not a status bar mode of MS Excel?

- Ans**
- 1. Ready mode
 - 2. Point mode
 - 3. Edit mode
 - 4. Exit mode

Question ID : **244113794**
Status : **Answered**
Chosen Option : **4**

Q.68 The first hard disk drive was the _____.

- Ans**
- 1. IBM Model 220 Disk File
 - 2. IBM Model 355 Disk file
 - 3. IBM Model 270 Disk File
 - 4. IBM Model 350 Disk file

Question ID : **244113790**
Status : **Not Answered**
Chosen Option : --

Q.69 What is an interface for transferring data between a computer's central circuit board and storage devices?

- Ans**
- 1. Serial advanced technology attachment
 - 2. Peripheral Component Interconnect
 - 3. Channel bonding
 - 4. Random Access Memory

Question ID : **244113784**
Status : **Not Answered**
Chosen Option : --

Q.70 A single CD-ROM has the storage capacity of _____ floppy disks.

- Ans**
- 1. 1000
 - 2. 400
 - 3. 900
 - 4. 700

Question ID : **244113772**
Status : **Not Answered**
Chosen Option : --

Q.71 DSP stands for _____.

- Ans**
- 1. Data Source Processors
 - 2. Digital Source Point
 - 3. Data Signal Processing
 - 4. Digital Signal Processors

Question ID : **244113782**
Status : **Answered**
Chosen Option : **4**

Q.72 _____ is the keyboard shortcut to turn the filters on or off.

- Ans**
- 1. Ctrl+Shift+L
 - 2. Ctrl+Shift+K
 - 3. Ctrl+Shift+F
 - 4. Ctrl+Shift+M

Question ID : **244113774**
Status : **Not Answered**
Chosen Option : --

Q.73 Expand GUI.

- Ans**
- 1. Graphical user interface
 - 2. Global user interface
 - 3. Graphical user interconnection
 - 4. Graphical under interface

Question ID : **244113795**
Status : **Answered**
Chosen Option : **1**

Q.74 Which one of the following is not a third-generation computer?

- Ans**
- 1. IBM-360 series
 - 2. Honeywell-6000 series
 - 3. IBM 7094
 - 4. PDP

Question ID : **244113788**
Status : **Not Answered**
Chosen Option : **--**

Q.75 Which monitor displays two colours, one for the background and one for the foreground?

- Ans**
- 1. CMYK monitor
 - 2. Monochrome Monitor
 - 3. RGB monitor
 - 4. Colour Monitor

Question ID : **244113786**
Status : **Not Answered**
Chosen Option : **--**

Q.76 is small but high-speed memory that makes current programs and data available to the CPU at a rapid rate.

- Ans**
- 1. Cache memory
 - 2. Virtual memory
 - 3. ROM
 - 4. RAM

Question ID : **244113789**
Status : **Answered**
Chosen Option : **1**

Q.77 Shyam wants to display the video and graphics information. Which output device should he use?

- Ans
- 1. Speaker
 - 2. Monitor
 - 3. Printer
 - 4. Projector

Question ID : 244113785
Status : Answered
Chosen Option : 2

Q.78 WORM is a type of _____.

- Ans
- 1. hard disk
 - 2. compact disk
 - 3. pen drive
 - 4. floppy disk

Question ID : 244113773
Status : Not Answered
Chosen Option : --

Q.79 When a new slide is inserted after the Title slide, the next slide has the Title and _____ layout.

- Ans
- 1. content
 - 2. table
 - 3. topic
 - 4. border

Question ID : 244113775
Status : Not Attempted and Marked For Review
Chosen Option : --

Q.80 IRC stands for _____.

- Ans
- 1. Internet Resistant Chat
 - 2. Intranet Resistant Chat
 - 3. Internet Relay Chat
 - 4. Intranet Relay Chat

Question ID : 244113777
Status : Answered
Chosen Option : 3

Q.81 The given set of labelled sentences when properly sequenced form a coherent paragraph. Select the most logical order of the sentences from the following options.

- A. The weak force is the mechanism that is responsible for beta decay.
 B. Radioactive decay is the process by which an unstable atomic nucleus loses energy by radiation.
 C. While the other two are governed by the usual electromagnetic and strong forces.
 D. Three of the most common types of decay are alpha decay, beta decay and gamma decay.

- Ans** 1. CADB
 2. ACDB
 3. DCBA
 4. BDAC

Question ID : 244113801
 Status : **Answered**
 Chosen Option : 4

Q.82 'ਮੈਨੂੰ ਇੱਕ ਸਵਾਲ ਪੁੱਛਣ ਦਿਓ' ਵਾਕ ਦਾ ਸਹੀ ਅੰਗਰੇਜ਼ੀ ਅਨੁਵਾਦ ਹੈ:-

- Ans** 1. Let me ask a question.
 2. Let me ask to him a question.
 3. Let me ask him something.
 4. Let him ask something.

Question ID : 244113808
 Status : **Answered**
 Chosen Option : 1

Q.83 A part of the given sentence may have an error. Find out which part of the sentence has an error and select the most appropriate option. If the sentence is free from error, select 'No error'.

Charles Darwin saw that all animals have to struggle to survive.

- Ans** 1. struggle to survive
 2. all animals have to
 3. Charles Darwin saw that
 4. No error

Question ID : 244113796
 Status : **Answered**
 Chosen Option : 3

Q.84 Select the most appropriate option to substitute the underlined segment in the given sentence. If there is no need to substitute it, select 'No substitution required'.

India had rebuked of American lack of sympathy for its concerns with Pakistan's policy.

- Ans** 1. No substitution required
 2. unhappy
 3. complain
 4. complained

Question ID : 244113797
 Status : **Not Answered**
 Chosen Option : --

Q.85 A sentence is given with two blanks. Select the option with the correct combination of words that fit into the corresponding blanks.

In Kerala, students and individuals _____ abroad for higher studies or jobs and for whom a vaccination certificate was necessary, _____ being given the Covishield vaccine.

- Ans** 1. going, were
 2. going, was
 3. gone, was
 4. went, are

Question ID : 244113799
Status : Answered
Chosen Option : 2

Q.86 Select the option which best expresses the meaning of the given word.

Flagrant

- Ans** 1. Apprehensive
 2. Blatant
 3. Phlegmatic
 4. Timid

Question ID : 244113804
Status : Not Answered
Chosen Option : --

Q.87 The given set of labelled sentences when properly sequenced form a coherent paragraph. Select the most logical order of the sentences from the following options.

P. And in a rage the elephant broke the branch of the tree on which the nest was residing.

Q. One morning, a wild elephant feeling restive came to the tree in search of shade.

R. There lived a sparrow that built a nice nest and laid her eggs in the nest.

- Ans** 1. QPR
 2. RPQ
 3. PQR
 4. RQP

Question ID : 244113800
Status : Answered
Chosen Option : 1

Q.88 Select the most appropriate ANTONYM of the given word.

Eradicate

- Ans** 1. Remove
 2. Preserve
 3. Discard
 4. Eliminate

Question ID : 244113802
Status : Not Answered
Chosen Option : --

Q.89 'ਉਸਨੂੰ ਸੱਚ ਬੋਲਣਾ ਪਵੇਗਾ' ਵਾਕ ਦਾ ਸਹੀ ਅੰਗਰੇਜ਼ੀ ਅਨੁਵਾਦ ਹੈ:-

- Ans**
- 1. He was speaking truth.
 - 2. He is speaking truth.
 - 3. He has to speak truth.
 - 4. He will speak truth.

Question ID : **244113809**
Status : **Answered**
Chosen Option : **3**

Q.90 'ਉਸ ਕੋਲ ਵੱਡਾ ਘਰ ਹੈ' ਵਾਕ ਦਾ ਸਹੀ ਅੰਗਰੇਜ਼ੀ ਅਨੁਵਾਦ ਹੈ:-

- Ans**
- 1. He has a big house.
 - 2. He have a big house.
 - 3. He will have a big house.
 - 4. He had a big house.

Question ID : **244113807**
Status : **Answered**
Chosen Option : **1**

Q.91 Select the option which is **OPPOSITE** in meaning to the given word.

Intricate

- Ans**
- 1. Extricate
 - 2. Accost
 - 3. Apparent
 - 4. Convoluted

Question ID : **244113803**
Status : **Not Answered**
Chosen Option : --

Q.92 'ਕਮਰਾ ਸਾਫ਼ ਕਰੋ' ਵਾਕ ਦਾ ਸਹੀ ਅੰਗਰੇਜ਼ੀ ਅਨੁਵਾਦ ਹੈ:-

- Ans**
- 1. Keep the room clean.
 - 2. Clean the room.
 - 3. Keep it clean here.
 - 4. Clean this room.

Question ID : **244113806**
Status : **Answered**
Chosen Option : **2**

Q.93 Select the most appropriate synonym of the given word.

Sag

- Ans** 1. Doubt
 2. Diminish
 3. Proliferate
 4. Participate

Question ID : **244113805**
Status : **Not Answered**
Chosen Option : --

Q.94 'ਰਾਜ ਬਹੁਤ ਸੋਹਣਾ ਗਾਉਂਦਾ ਹੈ' ਵਾਕ ਦਾ ਸਹੀ ਅੰਗਰੇਜ਼ੀ ਅਨੁਵਾਦ ਹੈ:-

- Ans** 1. Raj sings very beautifully.
 2. Raj will sing very beautifully.
 3. Raj is very beautiful singer.
 4. Raj is very good singer.

Question ID : **244113810**
Status : **Answered**
Chosen Option : 1

Q.95 Select the most appropriate option to fill in the blank.

When we _____ at the bus station, it turned out that the last bus had already left.

- Ans** 1. arrived
 2. had arrived
 3. arrive
 4. arrives

Question ID : **244113798**
Status : **Answered**
Chosen Option : 2

Comprehension:

Read the given passage carefully and answer the questions that follow.

Julius Caesar was a notable Roman statesman who eventually became one of the most crucial politicians of the Roman Empire before its decline. He, along with Crassus and Pompey, formed a political alliance called The First Triumvirate, which dominated the empire for years. However, Caesar's glorious wins in battles and his invasion of Britain soon became a threat to Pompey. Caesar was asked by the Senate to step down, but he didn't comply, leading to high opposition from the Senate and eventually in a conspiracy against Caesar and his assassination.

The notable play, 'The Tragedy of Julius Caesar', written by William Shakespeare, is a canon of English literature. The play was performed for the first time in 1599. The play is centred around the Roman statesman Julius Caesar and his eventual assassination. Though the play is named after Julius Caesar, it mostly centres around Brutus. It depicts the moral dilemma of Brutus, one of the closest friends of Caesar and a Roman Senator, who gets involved in the conspiracy to murder Caesar. The play begins with the return of Caesar from a victorious conquest and the beginning of a conspiracy against him among the senators. The Roman senators led by Cassius are seen to forge several documents and convince Brutus that Julius needs to be assassinated to save Rome.

Later, the senators approach Caesar with a fake petition regarding an issue involving Metellus Cimber's banished brother. As Caesar rejects the plea, he is stabbed by the others, the last stab being of Brutus. The death of Caesar gives rise to a series of civil wars in the Roman Empire. Brutus tries to pacify the crowd with his oration, but Mark Antony soon turns the public against the assassins with his own. Brutus and Cassius unite to battle against Mark Antony and Octavian Caesar. However, they both meet with an unfortunate and untimely death. The play ends with Antony paying his tribute to Brutus as he was the only noble soul in Rome who stabbed Caesar only because he was made to believe that it was for the greater good of the empire.

SubQuestion No : 96

Q.96 Why did Caesar face opposition from the Senate?

- Ans** 1. He did not comply with the Senate's request
2. Because he formed The First Triumvirate
3. Britain was threatening to attack Pompey
4. The Senate was envious of his growing power

Question ID : 244113814

Status : Answered

Chosen Option : 1

Comprehension:

Read the given passage carefully and answer the questions that follow.

Julius Caesar was a notable Roman statesman who eventually became one of the most crucial politicians of the Roman Empire before its decline. He, along with Crassus and Pompey, formed a political alliance called The First Triumvirate, which dominated the empire for years. However, Caesar's glorious wins in battles and his invasion of Britain soon became a threat to Pompey. Caesar was asked by the Senate to step down, but he didn't comply, leading to high opposition from the Senate and eventually in a conspiracy against Caesar and his assassination.

The notable play, 'The Tragedy of Julius Caesar', written by William Shakespeare, is a canon of English literature. The play was performed for the first time in 1599. The play is centred around the Roman statesman Julius Caesar and his eventual assassination. Though the play is named after Julius Caesar, it mostly centres around Brutus. It depicts the moral dilemma of Brutus, one of the closest friends of Caesar and a Roman Senator, who gets involved in the conspiracy to murder Caesar. The play begins with the return of Caesar from a victorious conquest and the beginning of a conspiracy against him among the senators. The Roman senators led by Cassius are seen to forge several documents and convince Brutus that Julius needs to be assassinated to save Rome.

Later, the senators approach Caesar with a fake petition regarding an issue involving Metellus Cimber's banished brother. As Caesar rejects the plea, he is stabbed by the others, the last stab being of Brutus. The death of Caesar gives rise to a series of civil wars in the Roman Empire. Brutus tries to pacify the crowd with his oration, but Mark Antony soon turns the public against the assassins with his own. Brutus and Cassius unite to battle against Mark Antony and Octavian Caesar. However, they both meet with an unfortunate and untimely death. The play ends with Antony paying his tribute to Brutus as he was the only noble soul in Rome who stabbed Caesar only because he was made to believe that it was for the greater good of the empire.

SubQuestion No : 97**Q.97 Did Mark Antony forgive Brutus?**

- Ans**
- 1. Yes, Brutus was a friend of Caesar after all.
 - 2. Yes, he understood that he had been tricked.
 - 3. No, he murders him along with Octavian.
 - 4. No, he united all of Rome against him.

Question ID : 244113813

Status : Answered

Chosen Option : 2

Comprehension:

Read the given passage carefully and answer the questions that follow.

Julius Caesar was a notable Roman statesman who eventually became one of the most crucial politicians of the Roman Empire before its decline. He, along with Crassus and Pompey, formed a political alliance called The First Triumvirate, which dominated the empire for years. However, Caesar's glorious wins in battles and his invasion of Britain soon became a threat to Pompey. Caesar was asked by the Senate to step down, but he didn't comply, leading to high opposition from the Senate and eventually in a conspiracy against Caesar and his assassination.

The notable play, 'The Tragedy of Julius Caesar', written by William Shakespeare, is a canon of English literature. The play was performed for the first time in 1599. The play is centred around the Roman statesman Julius Caesar and his eventual assassination. Though the play is named after Julius Caesar, it mostly centres around Brutus. It depicts the moral dilemma of Brutus, one of the closest friends of Caesar and a Roman Senator, who gets involved in the conspiracy to murder Caesar. The play begins with the return of Caesar from a victorious conquest and the beginning of a conspiracy against him among the senators. The Roman senators led by Cassius are seen to forge several documents and convince Brutus that Julius needs to be assassinated to save Rome.

Later, the senators approach Caesar with a fake petition regarding an issue involving Metellus Cimber's banished brother. As Caesar rejects the plea, he is stabbed by the others, the last stab being of Brutus. The death of Caesar gives rise to a series of civil wars in the Roman Empire. Brutus tries to pacify the crowd with his oration, but Mark Antony soon turns the public against the assassins with his own. Brutus and Cassius unite to battle against Mark Antony and Octavian Caesar. However, they both meet with an unfortunate and untimely death. The play ends with Antony paying his tribute to Brutus as he was the only noble soul in Rome who stabbed Caesar only because he was made to believe that it was for the greater good of the empire.

SubQuestion No : 98

Q.98 Who was the last person to stab Julius Caesar?

- Ans**
- 1. Cassius
 - 2. Brutus
 - 3. Metellus Cimber
 - 4. Mark Antony

Question ID : **244113812**

Status : **Answered**

Chosen Option : **4**

Comprehension:

Read the given passage carefully and answer the questions that follow.

Julius Caesar was a notable Roman statesman who eventually became one of the most crucial politicians of the Roman Empire before its decline. He, along with Crassus and Pompey, formed a political alliance called The First Triumvirate, which dominated the empire for years. However, Caesar's glorious wins in battles and his invasion of Britain soon became a threat to Pompey. Caesar was asked by the Senate to step down, but he didn't comply, leading to high opposition from the Senate and eventually in a conspiracy against Caesar and his assassination.

The notable play, 'The Tragedy of Julius Caesar', written by William Shakespeare, is a canon of English literature. The play was performed for the first time in 1599. The play is centred around the Roman statesman Julius Caesar and his eventual assassination. Though the play is named after Julius Caesar, it mostly centres around Brutus. It depicts the moral dilemma of Brutus, one of the closest friends of Caesar and a Roman Senator, who gets involved in the conspiracy to murder Caesar. The play begins with the return of Caesar from a victorious conquest and the beginning of a conspiracy against him among the senators. The Roman senators led by Cassius are seen to forge several documents and convince Brutus that Julius needs to be assassinated to save Rome.

Later, the senators approach Caesar with a fake petition regarding an issue involving Metellus Cimber's banished brother. As Caesar rejects the plea, he is stabbed by the others, the last stab being of Brutus. The death of Caesar gives rise to a series of civil wars in the Roman Empire. Brutus tries to pacify the crowd with his oration, but Mark Antony soon turns the public against the assassins with his own. Brutus and Cassius unite to battle against Mark Antony and Octavian Caesar. However, they both meet with an unfortunate and untimely death. The play ends with Antony paying his tribute to Brutus as he was the only noble soul in Rome who stabbed Caesar only because he was made to believe that it was for the greater good of the empire.

SubQuestion No : 99

Q.99 Why did Brutus stab Julius Caesar?

- Ans** 1. He wanted to assassinate him and usurp his power.
2. He was misled by Cassius and the other senators.
3. He rejected the plea of Metellus Cimber.
4. He despised Julius Caesar.

Question ID : 244113815

Status : Answered

Chosen Option : 3

Comprehension:

Read the given passage carefully and answer the questions that follow.

Julius Caesar was a notable Roman statesman who eventually became one of the most crucial politicians of the Roman Empire before its decline. He, along with Crassus and Pompey, formed a political alliance called The First Triumvirate, which dominated the empire for years. However, Caesar's glorious wins in battles and his invasion of Britain soon became a threat to Pompey. Caesar was asked by the Senate to step down, but he didn't comply, leading to high opposition from the Senate and eventually in a conspiracy against Caesar and his assassination.

The notable play, 'The Tragedy of Julius Caesar', written by William Shakespeare, is a canon of English literature. The play was performed for the first time in 1599. The play is centred around the Roman statesman Julius Caesar and his eventual assassination. Though the play is named after Julius Caesar, it mostly centres around Brutus. It depicts the moral dilemma of Brutus, one of the closest friends of Caesar and a Roman Senator, who gets involved in the conspiracy to murder Caesar. The play begins with the return of Caesar from a victorious conquest and the beginning of a conspiracy against him among the senators. The Roman senators led by Cassius are seen to forge several documents and convince Brutus that Julius needs to be assassinated to save Rome.

Later, the senators approach Caesar with a fake petition regarding an issue involving Metellus Cimber's banished brother. As Caesar rejects the plea, he is stabbed by the others, the last stab being of Brutus. The death of Caesar gives rise to a series of civil wars in the Roman Empire. Brutus tries to pacify the crowd with his oration, but Mark Antony soon turns the public against the assassins with his own. Brutus and Cassius unite to battle against Mark Antony and Octavian Caesar. However, they both meet with an unfortunate and untimely death. The play ends with Antony paying his tribute to Brutus as he was the only noble soul in Rome who stabbed Caesar only because he was made to believe that it was for the greater good of the empire.

SubQuestion No : 100

Q.100 What is the main idea behind the passage?

- Ans**
- 1. The moral dilemma of Brutus that led to him stabbing Caesar
 - 2. The life and legacy of Julius Caesar
 - 3. The oratory skills of Mark Antony
 - 4. The political climate of Pompey and Rome

Question ID : **244113816**

Status : **Answered**

Chosen Option : **2**

Visit Website - [Click Here](#)