

Punjab Police SI Question Paper 2021 PDF

www.examphase.com

Q.3 Which of the following options is the odd number pair?

- Ans
- 1. 7 - 50
 - 2. 6 - 35
 - 3. 8 - 63
 - 4. 3 - 8

Q.4 Four number-pairs have been given, out of which three are alike in some manner and one is different. Select the number-pair that is different from the rest.

- (12 _ 15), (19 _ 8), (16 _ 11), (13 _ 15)
- Ans
- 1. (16 _ 11)
 - 2. (13 _ 15)
 - 3. (12 _ 15)
 - 4. (19 _ 8)

Question ID : 63068031219
Status : Answered
Chosen Option : 3

Q.5 A is the brother of C and the father of X. F is the son of C and C is the wife of L. What is the relationship of F to X?

- Ans
- 1. Sister
 - 2. Brother
 - 3. Cousin
 - 4. Mother

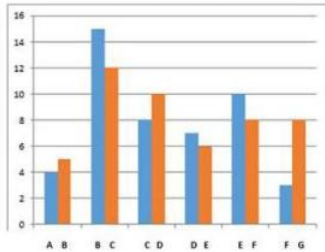
Question ID : 63068044981
Status : Answered
Chosen Option : 3

Q.6 In a certain code language, BACON is coded as 4263028. How will TARGET be coded in that language?

- Ans
- 1. 40236141040
 - 2. 40136071040
 - 3. 42236141042
 - 4. 38136071038

Question ID : 63068038286
Status : Answered
Chosen Option : 3

Q.7 The given double bar graph shows relative outputs produced by seven employees in the given time-periods, comparing two employees at a time. For example, in the time-period that A produces 4 units, B produces 5 units. Likewise, in the time-period that B produces 15 units, C produces 12 units. The representation continues in this manner.



If every employee is paid according to one's productivity, and A gets an hourly wage of ₹175, what will be the hourly wage of G?

- Ans
- 1. ₹525
 - 2. ₹425
 - 3. ₹350
 - 4. ₹400

Question ID : 63068041528
Status : Not Attempted and Marked For Review
Chosen Option : --

Q.8 Four letter-clusters have been given, out of which three are alike in some manner and one is different. Select the odd one.

- Ans
- 1. JLO
 - 2. HJM
 - 3. BDG
 - 4. UWY

Question ID : 63068021330
Status : Not Attempted and Marked For Review
Chosen Option : --

Q.9 In a certain code language, if "JYOTI" is coded as QZLUR and "KAVYA" is coded as PBEZZ, then how will "NILAM" be coded as in the same coding language?

- Ans
- 1. BONJM
 - 2. MJOBN
 - 3. NOJMB
 - 4. JONBM

Question ID : 63068026133
Status : Answered
Chosen Option : 3

Q.10 Table given below shows the total monthly salary (in rupees) and basic salary of four different employees of a company.

Persons	Total Monthly Salary	Basic Salary
Pankaj	32000	75%
Sushil	30000	18000
Santosh	45000	60%
Pawan	36000	24000

Note: Total Monthly salary = Basic Salary + Allowance
Total monthly basic salary of Santosh is how much more than the total monthly allowance of Sushil?

- Ans
- 1. Rs.20000
 - 2. Rs.15000
 - 3. Rs.18000
 - 4. Rs.16000

Question ID : 63068045249
Status : Answered
Chosen Option : 3

Q.11 Select the option that is related to the third letter cluster in the same way as the second letter cluster is related to the first letter cluster.
LM : SR :: UV : ?

- Ans
- 1. JI
 - 2. AE
 - 3. WX
 - 4. PQ

Question ID : 63068038104
Status : Answered
Chosen Option : 1

Q.12 Select the missing number from the given series.

13, 17, ?, 42, 67, 103

- Ans
- 1. 27
 - 2. 26
 - 3. 25
 - 4. 28

Question ID : 63068045273
Status : Answered
Chosen Option : 3

Q.13 Neha correctly remembers that the last sports event was held after January and before August. Priya correctly remembers that the said game was held before June. Udit correctly remembers that the month in which the sports events were held was more than 30 days. In which month of the year sports events were held?

- Ans
- 1. February or March
 - 2. March or May
 - 3. May or June
 - 4. April or May

Question ID : 63068045063
Status : Answered
Chosen Option : 3

Q.14 In a certain code, 'MAGNET' is written as 'AMNGTE'. How will 'FRIEND' be written as in that code?

- Ans
- 1. RFEJDN
 - 2. RFEIDN
 - 3. RFEIDM
 - 4. RFEIND

Question ID : 63068038648
Status : Answered
Chosen Option : 2

Q.15 The question below consists of a question and two statements numbered I and II given below it. You have to decide whether the data provided in the statements are sufficient to answer the question. Read both the statements and give answer:
What does 'ni' stand for in a code language?

I - In the code language 'this is very beautiful' is written as 'ni, ma, ti, ge'.
II - In the code language 'my village is beautiful' is written as 'pe, zi, ni, ma'.

- Ans
- 1. If the data in statement I alone are sufficient to answer the question, while the data in statement II alone are not sufficient to answer the question
 - 2. If the data in statement II alone are sufficient to answer the question, while the data in statement I alone are not sufficient to answer the question
 - 3. If the data given in both statements, statement I alone and statement II alone are independently sufficient to answer the question
 - 4. If the data given in both statements I and II together are not sufficient to answer the question

Question ID : 63068045084
Status : Answered
Chosen Option : 3

Q.16 The following table represents the marks obtained by five students in five subjects in an exam. Study the table and answer the question that follows.

Marks obtained by five students in five subjects in an exam

(Maximum Marks for each subject are 200).

STUDENT	SUBJECTS				
	English	Mathematics	History	Geography	Science
ANSH	112	183	124	175	191
ADITYA	170	161	143	163	148
NAVYA	126	179	137	101	153
SHIVANSH	139	165	98	123	171
ANAY	159	105	118	164	134

The total marks obtained by Aditya in English and History are what percentage of the total marks obtained by Ansh in Mathematics, Geography and Science?

- Ans
- 1. 175.39%
 - 2. 68.03%
 - 3. 57.01%
 - 4. 146.99%

Question ID : 63068026277
Status : Not Attempted and Marked For Review
Chosen Option : --

Q.17 Find the missing letters in the pattern:

a _ c _ a _ b a _ _ _ a a c _ a

- Ans
- 1. bacabcb
 - 2. bacabac
 - 3. baccbbc
 - 4. abcabca

Question ID : 63068044890
Status : Answered
Chosen Option : 1

Q.18 The given table represents the ratio of employed and unemployed people and population of seven Villages of a district.

Villages	Employed : Unemployed	Population
A	11 : 3	2856
B	17 : 13	4140
C	19 : 4	4600
D	9 : 7	3200
E	13 : 6	3800
F	8 : 3	3630
G	17 : 12	8410

If 40% of the unemployed people of rural area D are males, then what is the number of unemployed females in area D?

- Ans
- 1. 520
 - 2. 840
 - 3. 720
 - 4. 680

Question ID : 63068045241
 Status : Not Attempted and Marked For Review
 Chosen Option : --

Q.19 Five letter-clusters have been given, out of which four are alike in some manner and one is different. Select the letter-cluster that is different.
 INR, DGK, EJM, NSW, HMQ

- Ans
- 1. DGK
 - 2. HMQ
 - 3. INR
 - 4. NSW

Question ID : 63068038445
 Status : Answered
 Chosen Option : 3

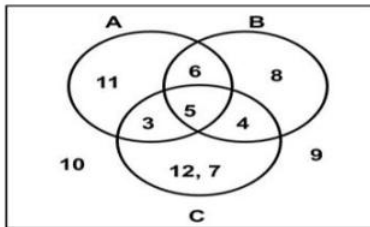
Q.20 Raju walked 20 km towards south, took right turn and walked 30 km. He took a left turn and walked 15 km. He took a left turn and walked 30 km. He took a right turn and walked 20 km. He took a right turn and walked 40 km. He took a right turn and walked 70 km. He took a right turn and walked 60 km. Finally, he took a right turn and walked 15 km.

How far was he from the starting point?

- Ans
- 1. 22 km
 - 2. 18 km
 - 3. 15 km
 - 4. 20 km

Question ID : 63068045009
 Status : Answered
 Chosen Option : 4

Q.21 Study the given figure and answer the question that follows.



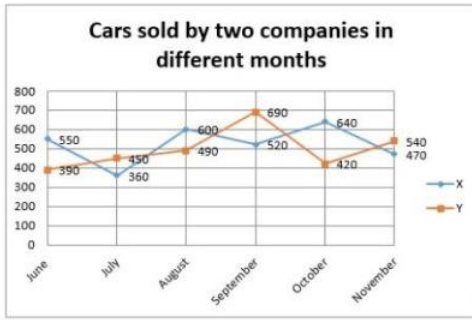
From the given Venn diagram, find the set $(A \cup B) \cap C$.

- Ans
- 1. { 7, 9, 10, 12 }
 - 2. { 7, 12 }
 - 3. { 3, 4, 5, 7, 12 }
 - 4. { 3, 4, 5 }

Question ID : 63068026270
 Status : Answered
 Chosen Option : 3

Q.22 Study the given graph and answer the questions that follow.

The graph shows the number of cars sold by two companies X and Y during the given six months.



The number of cars sold by company Y during August is what percent of the total number of cars sold by company X during September, October and November?

- Ans
- 1. 30.06%
 - 2. 37.57%
 - 3. 36.36 %
 - 4. 28.28%

Question ID : 63068026073
Status : Not Attempted and Marked For Review
Chosen Option : --

Q.23 In the following question, below are given some statements followed by some conclusions. You have to take the given statements to be true even if they seem to be at variance with commonly known facts. Read all the conclusions and then decide which of the given conclusions logically follows from the given statements, disregarding commonly known facts.

Statements:
All Banks are Parks
Some Parks are Pencils
No pencil is Monkey
All Monkeys are Brinjals

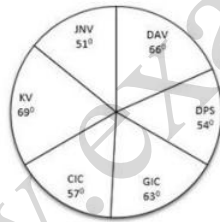
Conclusions:
I. No Bank is Brinjal
II. No Monkey is Park
III. Some Banks are Brinjals

- Ans
- 1. Only II follows
 - 2. Only I follows
 - 3. Either I or III follows
 - 4. Only I and II follow

Question ID : 63068044861
Status : Answered
Chosen Option : 3

Q.24 Study the given pie-chart carefully and answer the questions that follow.

The pie-chart represents the number of students of a town studying in six different schools, JNV, DAV, DPS, GIC, CIC and KV. The total number of students is 480.



How many students are studying in GIC?

- Ans
- 1. 92
 - 2. 76
 - 3. 68
 - 4. 84

Question ID : 63068026074
Status : Answered
Chosen Option : 2

Q.25 Which letter will replace the question mark (?) in the given series?

G, K, J, N, M, ?

- Ans
- 1. O
 - 2. P
 - 3. Q
 - 4. R

Question ID : 63068045979
Status : Answered
Chosen Option : 3

Q.26 The following table shows the marks range and number of students scoring in that range.

Marks range	Number of students
1-10	5
11-20	1
21-30	3
31-40	4
41-50	2

Calculate the number of students passing the exam considering score of 30 or less as fail.?

- Ans
- 1. 6
 - 2. 5
 - 3. 2
 - 4. 3

Question ID : 63068041532
Status : Answered
Chosen Option : 1

Q.27 Solve the equation:
64 : 12 :: 98 : ? :: 47 : 14

- Ans
- 1. 32
 - 2. 63
 - 3. 78
 - 4. 36

Question ID : 63068038719
Status : Answered
Chosen Option : 3

Q.28 Which number is different from others?

- Ans
- 1. (8:500)
 - 2. (7:342)
 - 3. (3:26)
 - 4. (4: 63)

Question ID : 63068038727
Status : Not Attempted and Marked For Review
Chosen Option : --

Q.29 Select the option that is related to the third number in the same way as the second number is related to the first number.

- 16 : 128 :: 12 : ?
- Ans
- 1. 70
 - 2. 74
 - 3. 72
 - 4. 144

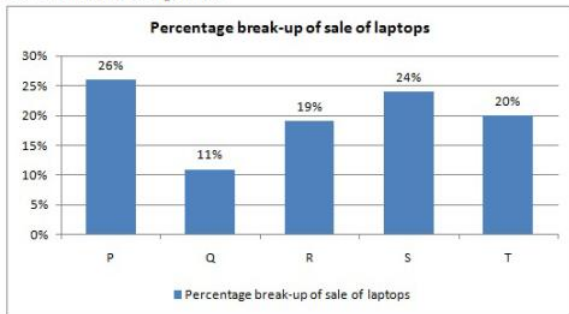
Question ID : 63068021407
Status : Answered
Chosen Option : 4

Q.30 Which number will come in place of the question mark (?) in the given number series?

- 1, 16, 49, 100, ?
- Ans
- 1. 169
 - 2. 290
 - 3. 149
 - 4. 195

Question ID : 63068026167
Status : Answered
Chosen Option : 1

Q.31 Following Bar graph represents percentage break-up of sale of laptops from different companies.



The difference between sale of laptops from company P and R is approximately what percent of the difference between sale of laptops from company Q and S?

- Ans
- 1. 61%
 - 2. 47%
 - 3. 44%
 - 4. 54%

Question ID : 63068045208
Status : Answered
Chosen Option : 2

Q.32 Two statements are given followed by four conclusions I, II, III and IV. You have to consider the two statements to be true even if they seem to be at variance from commonly known facts. Read all the conclusions and then decide which of the given conclusion(s) logically follows/follow from the given statements, disregarding commonly known facts.

Statements:
Some Coolers are Fans.
No Fan is a Bulb.

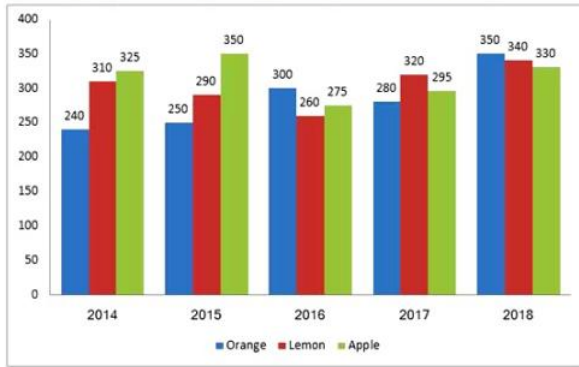
Conclusions:
I. Some Coolers are Bulbs.
II. Some Fans are Coolers.
III. All Fans are Coolers.
IV. Some Bulbs are Coolers.

- Ans
- 1. Only conclusions II and IV follow.
 - 2. Only conclusion I follows.
 - 3. Only conclusions I and III follow.
 - 4. Only conclusion II follows.

Question ID : 63068021251
Status : Answered
Chosen Option : 3

Q.33

The following bar graph shows the different flavours of soft drinks sold by a company over the years. (Quantity in thousand liters)



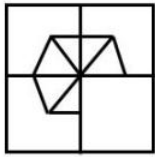
What is the percentage change in the sales of 'Orange soft drinks' from 2015 to 2018?

- Ans
- 1. 25 percent increase
 - 2. 40 percent increase
 - 3. 100 percent increase
 - 4. 60 percent decrease

Question ID : 63068045211
Status : Answered
Chosen Option : 1

Q.34

Complete the missing portion of the given pattern by selecting from the given alternatives:



Ans

- 1.
- 2.
- 3.
- 4.

Question ID : 63068038571
Status : Answered
Chosen Option : 3

Q.35

Ram walked 30 m towards east, took right turn and walked 20 m. He took a right turn and walked 15 m. He again took a right turn and walked 20 m. How far was he from the starting point?

- Ans
- 1. 7 m
 - 2. 30 m
 - 3. 10 m
 - 4. 15 m

Question ID : 63068044997
Status : Answered
Chosen Option : 2

Q.36

There are six members of a family present at an event namely- G, H, I, J, K, and L. H and I are brothers, G and J are their wives respectively. Each couple has one daughter. K is daughter of G.

Which of the following is a correct conclusion drawn from the above information?

- Ans
- 1. L is daughter of H
 - 2. K is daughter of I
 - 3. H is father of L
 - 4. K is daughter of H

Question ID : 63068044951
Status : Answered
Chosen Option : 4

Q.37

In the following question, select the related word from the given alternatives.

Detective: Informer :: Reporter : ?

- Ans
- 1. Essay
 - 2. News
 - 3. Source
 - 4. Editorial

Question ID : 63068044926
Status : Answered
Chosen Option : 3

Q.38

Janvi, Lilly, Misha, and Disha went to attend a lecture. No two persons came or left together. Disha left before Lilly, but came after Lilly. Lilly came after Misha, but left before Misha. Janvi came after Lilly and Misha, but left before Disha. Which of the following statements is definitely true?

- Ans
- 1. Lilly was the second to come and the second last to leave
 - 2. Janvi was the last person to come and first person to leave the lecture
 - 3. Disha came to the lecture before Janvi and left before Lilly
 - 4. Janvi came to the lecture after Lilly but before Disha

Question ID : 63068045115
Status : Answered
Chosen Option : 2

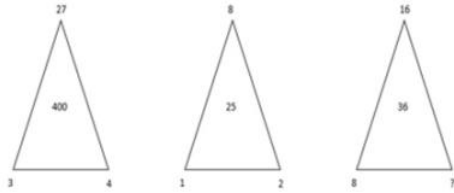
Q.39 Select the term that will come next in the following series.

AXN, DUQ, GRT, ?

- Ans
- 1. RPN
 - 2. VTU
 - 3. JOW
 - 4. XZY

Question ID : 63068044907
Status : Answered
Chosen Option : 3

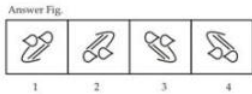
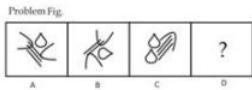
Q.40 Study the given pattern carefully and select the number that can replace the question mark (?) in it.



- Ans
- 1. 2
 - 2. 3
 - 3. 5
 - 4. 4

Question ID : 63068031230
Status : Answered
Chosen Option : 4

Q.41 Select the answer figure that is related to figure C in the same way as figure B is related to figure A.



- Ans
- 1. 2
 - 2. 1
 - 3. 3
 - 4. 4

Question ID : 63068038018
Status : Answered
Chosen Option : 1

Q.42 There are five children – A, B, C, D and E. A is heavier than B and C. D is heavier than C but lighter than E, E is lighter than B. Which of the following is the correct arrangement of children in increasing order of their weights?

- Ans
- 1. C, D, E, A, B
 - 2. A, E, B, C, D
 - 3. A, B, E, D, C
 - 4. C, D, E, B, A

Question ID : 63068045129
Status : Answered
Chosen Option : 3

Q.43 Find the figure from the answer figure that will replace the question mark (?) from the problem figure.



- Ans
- 1.
 - 2.
 - 3.
 - 4.

Question ID : 63068045171
Status : Answered
Chosen Option : 4

Q.44 In the following question, select the odd letters from the given alternatives.

- Ans
- 1. FHJLN
 - 2. PQRST
 - 3. ACEGI
 - 4. KMOQS

Question ID : 63068045036
Status : Answered
Chosen Option : 4

Q.45 Select the term that can replace the question mark (?) in the following series.

ZA, YB, WD, TG, ?

- Ans
- 1. PJ
 - 2. OL
 - 3. PK
 - 4. QJ

Question ID : 63068045993
Status : Answered
Chosen Option : 3

Comprehension:

Article 15(2) stipulates that citizens shall not on grounds only of religion, race, caste, sex, or place of religion, race, caste, sex, or place of birth be denied access to shops, public restaurants, hotels and places of public entertainment. Yet, on occasion, this right, which applies horizontally, inter se individuals, comes into conflict with the rights of persons to associate with others, often to the exclusion of certain groups. This is why every time a case of discrimination is brought, the party that discriminates claims that he possesses a liberty to do, that he must be free to act according to his own sense of conscience.

The Supreme Court, in 2005, in Zoroastrian Cooperative Housing Society vs District Register Co-operative Societies (Urban) and Others, endorsed one such restrictive bond, when it ruled in favour of a bye-law of a Parsi housing society that prohibited the sale of property to non- Parsis. This right to forbid such a sale, the Court ruled, was intrinsic in the Parsis' fundamental right to associate with each other. But in holding thus, the judgment, as Gautam Bhatia points out in his book, The Transformative Constitution, not only conflated the freedom to contract with the constitutional freedom to associate, but also overlooked altogether Article 15(2).

At first blush, Article 15(2) might appear to be somewhat limited in scope. But the word "shops" used in it is meant to be read widely. A study of the Constituent Assembly's debates on the clause's framing shows us that the founders explicitly intended to place restrictions on any economic activity that sought to exclude specific groups. For example, when a person refuses to lease her property to another based on the customer's faith, such a refusal would run directly counter to the guarantee of equality.

An overruling of the verdict in Zoroastrian Cooperative, while desirable, is unlikely, however, to serve as a panacea. India is unique among democracies in that a constitutional right to equality is not supported by comprehensive legislation. In South Africa, for example, a constitutional guarantee is augmented by and all-encompassing law which prohibits unfair discrimination not only by the government but also by private organisation and individuals.

SubQuestion No : 46

Q.46 What verdict Supreme Court gave in the Zoroastrian Cooperative Housing Society vs District Register Co-operative Societies (Urban) and Others?

- Ans
- 1. It ruled in favour of fundamental law of ownership to only Parsi people
 - 2. It cited the rule of law of equality in matters of housing rights and distributed the housing society amongst the players.
 - 3. It referred the matter to a tribunal.
 - 4. It ruled against the fundamental Parsi law of ownership to only Parsi people

Question ID : 63068046051
Status : Answered
Chosen Option : 2

Comprehension:

Article 15(2) stipulates that citizens shall not on grounds only of religion, race, caste, sex, or place of religion, race, caste, sex, or place of birth be denied access to shops, public restaurants, hotels and places of public entertainment. Yet, on occasion, this right, which applies horizontally, inter se individuals, comes into conflict with the rights of persons to associate with others, often to the exclusion of certain groups. This is why every time a case of discrimination is brought, the party that discriminates claims that he possesses a liberty to do, that he must be free to act according to his own sense of conscience.

The Supreme Court, in 2005, in Zoroastrian Cooperative Housing Society vs District Register Co-operative Societies (Urban) and Others, endorsed one such restrictive bond, when it ruled in favour of a bye-law of a Parsi housing society that prohibited the sale of property to non- Parsis. This right to forbid such a sale, the Court ruled, was intrinsic in the Parsis' fundamental right to associate with each other. But in holding thus, the judgment, as Gautam Bhatia points out in his book, The Transformative Constitution, not only conflated the freedom to contract with the constitutional freedom to associate, but also overlooked altogether Article 15(2).

At first blush, Article 15(2) might appear to be somewhat limited in scope. But the word "shops" used in it is meant to be read widely. A study of the Constituent Assembly's debates on the clause's framing shows us that the founders explicitly intended to place restrictions on any economic activity that sought to exclude specific groups. For example, when a person refuses to lease her property to another based on the customer's faith, such a refusal would run directly counter to the guarantee of equality.

An overruling of the verdict in Zoroastrian Cooperative, while desirable, is unlikely, however, to serve as a panacea. India is unique among democracies in that a constitutional right to equality is not supported by comprehensive legislation. In South Africa, for example, a constitutional guarantee is augmented by and all-encompassing law which prohibits unfair discrimination not only by the government but also by private organisation and individuals.

SubQuestion No : 47

Q.47 Which Article of Indian Constitution provides for rights against discrimination?

- Ans
- 1. Art.15(2)
 - 2. Art. 14
 - 3. Art. 17
 - 4. Art. 21

Question ID : 63068046052
Status : Answered
Chosen Option : 1

Comprehension:

Article 15(2) stipulates that citizens shall not on grounds only of religion, race, caste, sex, or place of religion, race, caste, sex, or place of birth be denied access to shops, public restaurants, hotels and places of public entertainment. Yet, on occasion, this right, which applies horizontally, inter se individuals, comes into conflict with the rights of persons to associate with others, often to the exclusion of certain groups. This is why every time a case of discrimination is brought, the party that discriminates claims that he possesses a liberty to do, that he must be free to act according to his own sense of conscience.

The Supreme Court, in 2005, in Zoroastrian Cooperative Housing Society vs District Register Co-operative Societies (Urban) and Others, endorsed one such restrictive bond, when it ruled in favour of a bye-law of a Parsi housing society that prohibited the sale of property to non- Parsis. This right to forbid such a sale, the Court ruled, was intrinsic in the Parsis' fundamental right to associate with each other. But in holding thus, the judgment, as Gautam Bhatia points out in his book, The Transformative Constitution, not only conflated the freedom to contract with the constitutional freedom to associate, but also overlooked altogether Article 15(2).

At first blush, Article 15(2) might appear to be somewhat limited in scope. But the word "shops" used in it is meant to be read widely. A study of the Constituent Assembly's debates on the clause's framing shows us that the founders explicitly intended to place restrictions on any economic activity that sought to exclude specific groups. For example, when a person refuses to lease her property to another based on the customer's faith, such a refusal would run directly counter to the guarantee of equality.

An overruling of the verdict in Zoroastrian Cooperative, while desirable, is unlikely, however, to serve as a panacea. India is unique among democracies in that a constitutional right to equality is not supported by comprehensive legislation. In South Africa, for example, a constitutional guarantee is augmented by and all-encompassing law which prohibits unfair discrimination not only by the government but also by private organisation and individuals.

SubQuestion No : 48

Q.48 Where does Article 15.2 of Indian Constitution fall short?

- Ans
- 1. Right to freedom of Life and liberty
 - 2. Freedom of Association
 - 3. Freedom of Speech
 - 4. Constitutional Guarantee against discrimination not only in governmental Organizations but also in private organizations

Question ID : 63068046053
Status : Answered
Chosen Option : 4

Comprehension:

Article 15(2) stipulates that citizens shall not on grounds only of religion, race, caste, sex, or place of religion, race, caste, sex, or place of birth be denied access to shops, public restaurants, hotels and places of public entertainment. Yet, on occasion, this right, which applies horizontally, interfere individuals, comes into conflict with the rights of persons to associate with others, often to the exclusion of certain groups. This is why every time a case of discrimination is brought, the party that discriminates claims that he possesses a liberty to do, that he must be free to act according to his own sense of conscience.

The Supreme Court, in 2005, in Zoroastrian Cooperative Housing Society vs District Register Co-operative Societies (Urban) and Others, endorsed one such restrictive bond, when it ruled in favour of a bye-law of a Parsi housing society that prohibited the sale of property to non- Parsis. This right to forbid such a sale, the Court ruled, was intrinsic in the Parsis' fundamental right to associate with each other. But in holding thus, the judgment, as Gautam Bhatia points out in his book, Th Transformative Constitution, not only conflated the freedom to contract with the constitutional freedom to associate, but also overlooked altogether Article 15(2).

At first blush, Article 15(2) might appear to be somewhat limited in scope. But the word "shops" used in it is meant to be read widely. A study of the Constituent Assembly's debates on the clause's framing shows us that the founders explicitly intended to place restrictions on any economic activity that sought to exclude specific groups. For example, when a person refuses to lease her property to another based on the customer's faith, such a refusal would run directly counter to the guarantee of equality.

An overruling of the verdict in Zoroastrian Cooperative, while desirable, is unlikely, however, to serve as a panacea. India is unique among democracies in that a constitutional right to equality is not supported by comprehensive legislation. In South Africa, for example, a constitutional guarantee is augmented by and all-encompassing law which prohibits unfair discrimination not only by the government but also by private organisation and individuals.

SubQuestion No : 49

Q.49 A refuses to Lease his house to B on the pretext of his faith. Which of the following gives a sense the remedy for the discrimination against B?

- Ans**
- 1. A study of the Constituent Assembly's debates on the clause's framing shows us that the founders explicitly intended to place restrictions on any economic activity that sought to exclude specific groups
 - 2. A is liable for Criminal Breach of Trust
 - 3. India is unique among democracies in that a constitutional right to equality and the said equality is not supported by comprehensive legislation.
 - 4. At first blush, Article 15(2) might appear to be somewhat limited in scope. But the word "shops" used in it is meant to be read widely.

Question ID : 63068046054
Status : **Answered**
Chosen Option : 1

Comprehension:

Article 15(2) stipulates that citizens shall not on grounds only of religion, race, caste, sex, or place of religion, race, caste, sex, or place of birth be denied access to shops, public restaurants, hotels and places of public entertainment. Yet, on occasion, this right, which applies horizontally, interfere individuals, comes into conflict with the rights of persons to associate with others, often to the exclusion of certain groups. This is why every time a case of discrimination is brought, the party that discriminates claims that he possesses a liberty to do, that he must be free to act according to his own sense of conscience.

The Supreme Court, in 2005, in Zoroastrian Cooperative Housing Society vs District Register Co-operative Societies (Urban) and Others, endorsed one such restrictive bond, when it ruled in favour of a bye-law of a Parsi housing society that prohibited the sale of property to non- Parsis. This right to forbid such a sale, the Court ruled, was intrinsic in the Parsis' fundamental right to associate with each other. But in holding thus, the judgment, as Gautam Bhatia points out in his book, Th Transformative Constitution, not only conflated the freedom to contract with the constitutional freedom to associate, but also overlooked altogether Article 15(2).

At first blush, Article 15(2) might appear to be somewhat limited in scope. But the word "shops" used in it is meant to be read widely. A study of the Constituent Assembly's debates on the clause's framing shows us that the founders explicitly intended to place restrictions on any economic activity that sought to exclude specific groups. For example, when a person refuses to lease her property to another based on the customer's faith, such a refusal would run directly counter to the guarantee of equality.

An overruling of the verdict in Zoroastrian Cooperative, while desirable, is unlikely, however, to serve as a panacea. India is unique among democracies in that a constitutional right to equality is not supported by comprehensive legislation. In South Africa, for example, a constitutional guarantee is augmented by and all-encompassing law which prohibits unfair discrimination not only by the government but also by private organisation and individuals.

SubQuestion No : 50

Q.50 Why does Article 15(2) have a limited Scope?

- Ans**
- 1. It has limitation with respect to judicial intervention.
 - 2. It covers discrimination with respect to access to shops and places of public importance but not respect to religious places.
 - 3. It covers discrimination against only Public sector and the not private entities.
 - 4. It covers only religious and caste discrimination

Question ID : 63068046055
Status : **Answered**
Chosen Option : 3

Q.51 A _____ is an ideal output device for architect generating high-precision hardcopy graphic output of varying size.

- Ans**
- 1. plotter
 - 2. VDT
 - 3. printer
 - 4. Monitor

Question ID : 63068044535
Status : **Answered**
Chosen Option : 4

Q.52 Which of the following statement is true regarding H.323 protocol in VoIP?
I. It is a VoIP standard for defining the components, protocols and procedures.
II. It provides real time multimedia sessions over packet-switched networks.

- Ans**
- 1. Both I and II
 - 2. Neither I nor II
 - 3. Only I
 - 4. Only II

Question ID : 63068044747
Status : **Answered**
Chosen Option : 1

Q.53 A disk sector generally contains _____ bytes

- Ans**
- 1. 2^8
 - 2. 2^9
 - 3. 2^{10}
 - 4. 2^7

Question ID : 63068044569
Status : **Answered**
Chosen Option : 1

Q.54 Which of the following cybercrime is basically used for committing financial crimes?

- Ans**
- 1. Neither I nor II
 - 2. Only II
 - 3. Only I
 - 4. Both I and II

Question ID : 63068044846
Status : **Answered**
Chosen Option : 2

Q.55 Which of the following is a presentation view type in MS PowerPoint 2019?

- Ans**
- 1. Only II
 - 2. Both I and II
 - 3. Neither I nor II
 - 4. Only I

Question ID : 63068044641
Status : **Answered**
Chosen Option : 2

Q.56 When does an operating system verify the identity of a user?

- Ans**
- 1. At login time
 - 2. During booting
 - 3. At user command
 - 4. While registering new user

Question ID : 63068045669
Status : **Answered**
Chosen Option : 1

Q.57 Which of the following tasks a user can perform with the help of web browsers?
I. User can access search engines.
II. User can access email.
III. User can use all the facilities of the internet.

- Ans
- 1. I, II and III
 - 2. I and II
 - 3. II and III
 - 4. Only I

Question ID : 63068045293
Status : Answered
Chosen Option : 1

Q.58 In MS PowerPoint 2019, which shortcut key is used to show or hide the grids?

- Ans
- 1. Shift + F10
 - 2. Shift + F9
 - 3. Shift + F12
 - 4. Shift + F11

Question ID : 63068044644
Status : Answered
Chosen Option : 3

Q.59 In MS Excel 2019, which shortcut key is used to open the insert function window?

- Ans
- 1. Shift + F5
 - 2. Shift + F2
 - 3. Shift + F3
 - 4. Shift + F4

Question ID : 63068044612
Status : Answered
Chosen Option : 4

Q.60 Which statement is/are true about Data Scanning Devices?
I. Eliminate the need of manual entry
II. Need degraded quality of data source

- Ans
- 1. Neither I nor II
 - 2. Both I and II
 - 3. Only II
 - 4. Only I

Question ID : 63068044510
Status : Answered
Chosen Option : 2

Q.61 Which of the following pair is correct?

I. Plotter : Drum
II. Printer : Drum

- Ans
- 1. Only I
 - 2. Both I and II
 - 3. Only II
 - 4. Neither I nor II

Question ID : 63068044536
Status : Answered
Chosen Option : 2

Q.62 In a computer system, _____ points to the next instruction to be executed, i.e., it contains the memory address of the next instruction to be executed.

- Ans
- 1. control counter
 - 2. program counter
 - 3. accumulator contour
 - 4. memory counter

Question ID : 63068045403
Status : Answered
Chosen Option : 2

Q.63 In MS Excel 2019, which of the following pair of function type is correct?

I. ABS – Math and trigonometry
II. NPV – Financial

- Ans
- 1. Only I
 - 2. Only II
 - 3. Both I and II
 - 4. Neither I nor II

Question ID : 63068044626
Status : Answered
Chosen Option : 3

Q.64 Fake news requires three different elements to succeed. Which of the following are those elements?

I. Tools and services to manipulate the spread of fake news on social networks.
II. Social networks which need to exist as a platform to spread fake news.
III. Motivation.

- Ans
- 1. I and II
 - 2. I, II and III
 - 3. II and III
 - 4. Only II

Question ID : 63068044813
Status : Answered
Chosen Option : 2

Q.65 Web directory is a category of search engines. Which of the following is the example of Web directory?

- Ans
- 1. Yahoo!
 - 2. Alta Vista
 - 3. Google
 - 4. Metasearch

Question ID : 63068045311
Status : Answered
Chosen Option : 3

Q.66 How the cordless mouse communicates?

- Ans
- 1. By transmitting microwave
 - 2. By transmitting radio frequency
 - 3. By sensing laser
 - 4. By sending message

Question ID : 63068044505
Status : Answered
Chosen Option : 2

Q.67 Which of the following is a punctuation key found in a keyboard?

I. comma
II. period
III. Semicolon

- Ans
- 1. I and II
 - 2. I and III
 - 3. I, II and III
 - 4. II and III

Question ID : 63068045418
Status : Answered
Chosen Option : 2

Q.68 A system where _____ secret key(s) is/are shared is called Symmetric or Secret Key Cryptography.

- Ans
- 1. One
 - 2. Four
 - 3. Three
 - 4. Two

Question ID : 63068045328
Status : Not Attempted and Marked For Review
Chosen Option : --

<p>Q.69 Digital certificates are provided by Certified Authorities to authenticate that a particular site is globally secured. Which of the following is a certified authority in India? I. IDRBT II. NIC III. Safescrypt Ltd.</p> <p>Ans <input checked="" type="checkbox"/> 1. I and II <input checked="" type="checkbox"/> 2. I, II and III <input checked="" type="checkbox"/> 3. II and III <input checked="" type="checkbox"/> 4. I and III</p>	<p>Question ID : 63068045337 Status : Answered Chosen Option : 2</p>
<p>Q.70 _____ encryption method is used in Skype communication.</p> <p>Ans <input checked="" type="checkbox"/> 1. SHA <input checked="" type="checkbox"/> 2. AEU <input checked="" type="checkbox"/> 3. AES <input checked="" type="checkbox"/> 4. DES</p>	<p>Question ID : 63068044748 Status : Not Attempted and Marked For Review Chosen Option : --</p>
<p>Q.71 Which of the following statement is correct? I. VoIP can allow you to make a call directly from a computer. II. VoIP phones do not have their own MAC address.</p> <p>Ans <input checked="" type="checkbox"/> 1. Both I and II <input checked="" type="checkbox"/> 2. Neither I nor II <input checked="" type="checkbox"/> 3. Only II <input checked="" type="checkbox"/> 4. Only I</p>	<p>Question ID : 63068044742 Status : Answered Chosen Option : 4</p>
<p>Q.72 _____ transforms input data and instructions into binary codes that are acceptable to the computer.</p> <p>Ans <input checked="" type="checkbox"/> 1. Storage unit <input checked="" type="checkbox"/> 2. Control unit <input checked="" type="checkbox"/> 3. Input interface <input checked="" type="checkbox"/> 4. Output unit</p>	<p>Question ID : 63068045377 Status : Answered Chosen Option : 2</p>
<p>Q.73 Which of the following is an example of Operating System?</p> <p>Ans <input checked="" type="checkbox"/> 1. MS Access <input checked="" type="checkbox"/> 2. MS Excel <input checked="" type="checkbox"/> 3. MS Windows <input checked="" type="checkbox"/> 4. MS Word</p>	<p>Question ID : 63068045636 Status : Answered Chosen Option : 1</p>
<p>Q.74 In which year Instagram Reels were launched in India?</p> <p>Ans <input checked="" type="checkbox"/> 1. 2021 <input checked="" type="checkbox"/> 2. 2018 <input checked="" type="checkbox"/> 3. 2019 <input checked="" type="checkbox"/> 4. 2020</p>	<p>Question ID : 63068044776 Status : Answered Chosen Option : 4</p>
<p>Q.75 Protocols like Realtime Transport Protocol (RTP) may run over unreliable UDP instead of reliable TCP. What is the full form of UDP?</p> <p>Ans <input checked="" type="checkbox"/> 1. User Datagram Protocol <input checked="" type="checkbox"/> 2. User Diagram Protocol <input checked="" type="checkbox"/> 3. User Deletion Protocol <input checked="" type="checkbox"/> 4. User Draft Protocol</p>	<p>Question ID : 63068045324 Status : Answered Chosen Option : 3</p>
<p>Q.76 Leased line is also known as _____.</p> <p>Ans <input checked="" type="checkbox"/> 1. Switched line <input checked="" type="checkbox"/> 2. Dial up line <input checked="" type="checkbox"/> 3. ISDN line <input checked="" type="checkbox"/> 4. Dedicated line</p>	<p>Question ID : 63068044697 Status : Answered Chosen Option : 1</p>
<p>Q.77 How entertainment media maintain their social media profiles? I. Before launching a cinema, the marketing team of the cinema launches a particular hashtag on their social media accounts through which they promote the movie. II. Various radio stations are video recording interviews for placing it on YouTube as well as developing short skits to develop a new audience base.</p> <p>Ans <input checked="" type="checkbox"/> 1. Neither I nor II <input checked="" type="checkbox"/> 2. Only II <input checked="" type="checkbox"/> 3. Both I and II <input checked="" type="checkbox"/> 4. Only I</p>	<p>Question ID : 63068044798 Status : Answered Chosen Option : 3</p>
<p>Q.78 In MS Excel 2019, which of the following pair of tabcomponent is correct? I. Insert – Filter II. Data – Tables</p> <p>Ans <input checked="" type="checkbox"/> 1. Both I and II <input checked="" type="checkbox"/> 2. Only I <input checked="" type="checkbox"/> 3. Only II <input checked="" type="checkbox"/> 4. Neither I nor II</p>	<p>Question ID : 63068044632 Status : Answered Chosen Option : 1</p>
<p>Q.79 In a computer system, _____ contains the address of a location in the memory.</p> <p>Ans <input checked="" type="checkbox"/> 1. memory port array <input checked="" type="checkbox"/> 2. postman port array <input checked="" type="checkbox"/> 3. memory address register <input checked="" type="checkbox"/> 4. memory array register</p>	<p>Question ID : 63068045368 Status : Not Attempted and Marked For Review Chosen Option : --</p>
<p>Q.80 Which of the following is a shortcut to copy the selected text in MS Word 2019?</p> <p>Ans <input checked="" type="checkbox"/> 1. Ctrl + A <input checked="" type="checkbox"/> 2. Ctrl + C <input checked="" type="checkbox"/> 3. Alt + C <input checked="" type="checkbox"/> 4. Alt + A</p>	<p>Question ID : 63068045432 Status : Answered Chosen Option : 3</p>

<p>Q.81 In the given sentence, identify the segment which contains grammatical error.</p> <p>They have collected/ sufficient clothing and food/ about the flood victims/ of Orissa with much difficulty.</p> <p>Ans <input checked="" type="checkbox"/> 1. of Orissa with much difficulty <input checked="" type="checkbox"/> 2. about the flood victims <input checked="" type="checkbox"/> 3. sufficient clothing and food <input checked="" type="checkbox"/> 4. They have collected</p>	<p>Question ID : 63068035739 Status : Answered Chosen Option : 2</p>
<p>Q.82 The parts of a sentence have been jumbled and labelled as P, Q, R, S. Rearrange the jumbled parts to form a meaningful sentence.</p> <p>I could not do so (P) / to help my friend (Q) / although I had promised (R) / with the project (S)</p> <p>Ans <input checked="" type="checkbox"/> 1. R, Q, S, P <input checked="" type="checkbox"/> 2. R, P, S, Q <input checked="" type="checkbox"/> 3. S, R, P, Q <input checked="" type="checkbox"/> 4. Q, S, R, P</p>	<p>Question ID : 63068026016 Status : Answered Chosen Option : 4</p>
<p>Q.83 Select the correct antonym for the word.</p> <p>'Hostility'</p> <p>Ans <input checked="" type="checkbox"/> 1. Friendship <input checked="" type="checkbox"/> 2. Animosity <input checked="" type="checkbox"/> 3. Enmity <input checked="" type="checkbox"/> 4. Militancy</p>	<p>Question ID : 63068035637 Status : Not Attempted and Marked For Review Chosen Option : --</p>
<p>Q.84 Select the most appropriate option to substitute the underlined segment in the given sentence. If there is no need to substitute it, select 'No correction'.</p> <p>As my friend and I talked, we discovered that both of us had a much in common.</p> <p>Ans <input checked="" type="checkbox"/> 1. No correction <input checked="" type="checkbox"/> 2. had a many <input checked="" type="checkbox"/> 3. had a lot <input checked="" type="checkbox"/> 4. had a lots</p>	<p>Question ID : 63068035380 Status : Answered Chosen Option : 2</p>
<p>Q.85 'ਜਸੂਸ ਨੇ ਆਪਣੇ ਦੇਸ਼ ਨਾਲ ਗਦਾਰੀ ਨਹੀਂ ਕੀਤੀ' ਵਾਕ ਦਾ ਸਹੀ ਅੰਗਰੇਜ਼ੀ ਅਨੁਵਾਦ ਹੈ:-</p> <p>Ans <input checked="" type="checkbox"/> 1. The spy do not betray his country <input checked="" type="checkbox"/> 2. The spy did not betrayed his country <input checked="" type="checkbox"/> 3. The spy does not betray his country <input checked="" type="checkbox"/> 4. The spy did not betray his country</p>	<p>Question ID : 63068045533 Status : Answered Chosen Option : 1</p>
<p>Q.86 Choose the correct synonym of the given word.</p> <p>LABYRINTH</p> <p>Ans <input checked="" type="checkbox"/> 1. Maze <input checked="" type="checkbox"/> 2. Large <input checked="" type="checkbox"/> 3. Cluster <input checked="" type="checkbox"/> 4. Warehouse</p>	<p>Question ID : 63068035241 Status : Not Attempted and Marked For Review Chosen Option : --</p>
<p>Q.87 Identify the meaning of the underlined word in the sentence from the four options given below.</p> <p>Throughout the interview, the reporters <u>scribbled</u> away furiously.</p> <p>Ans <input checked="" type="checkbox"/> 1. Fought furiously <input checked="" type="checkbox"/> 2. Spoke very quickly and irresponsibly <input checked="" type="checkbox"/> 3. Wrote very quickly and carelessly <input checked="" type="checkbox"/> 4. Spoke very quickly and callously</p>	<p>Question ID : 63068035094 Status : Not Attempted and Marked For Review Chosen Option : --</p>
<p>Q.88 'ਪਛਾੜਨਾ' ਸ਼ਬਦ ਦਾ ਸਹੀ ਅੰਗਰੇਜ਼ੀ ਅਨੁਵਾਦ ਹੈ:-</p> <p>Ans <input checked="" type="checkbox"/> 1. Winning <input checked="" type="checkbox"/> 2. knockabout <input checked="" type="checkbox"/> 3. Knockout <input checked="" type="checkbox"/> 4. knockup</p>	<p>Question ID : 63068045489 Status : Answered Chosen Option : 1</p>
<p>Q.89 From the options given, select the appropriate words to fill in the given blanks.</p> <p>_____ higher you go, _____ cooler it is.</p> <p>Ans <input checked="" type="checkbox"/> 1. A; the <input checked="" type="checkbox"/> 2. A; a <input checked="" type="checkbox"/> 3. The; a <input checked="" type="checkbox"/> 4. The; the</p>	<p>Question ID : 63068035386 Status : Answered Chosen Option : 4</p>
<p>Q.90 Identify the segment in the sentence which contains a grammatical error.</p> <p>The new student who challenged Rancho and I has been winning the wrestling championship every year.</p> <p>Ans <input checked="" type="checkbox"/> 1. who challenged <input checked="" type="checkbox"/> 2. I <input checked="" type="checkbox"/> 3. has been winning <input checked="" type="checkbox"/> 4. every year</p>	<p>Question ID : 63068035229 Status : Answered Chosen Option : 2</p>
<p>Q.91 'ਮੈਂ ਆਪਣੇ ਮਾਤਾ ਪਿਤਾ ਦਾ ਦਿਲੋਂ ਸਤਿਕਾਰ ਕਰਦਾ ਹਾਂ' ਵਾਕ ਦਾ ਸਹੀ ਅੰਗਰੇਜ਼ੀ ਅਨੁਵਾਦ ਹੈ:-</p> <p>Ans <input checked="" type="checkbox"/> 1. I respect the parents from the core of my heart <input checked="" type="checkbox"/> 2. I respect my parents from the core of my heart <input checked="" type="checkbox"/> 3. I respect our parents from the core of my heart <input checked="" type="checkbox"/> 4. I respect my parents from my heart</p>	<p>Question ID : 63068045528 Status : Answered Chosen Option : 2</p>

Q.92 'ਦਸਤਾਵੇਜ਼ੀ ਸਬੂਤ ਮਹੱਤਵਪੂਰਣ ਹਨ' ਵਾਕ ਦਾ ਸਹੀ ਅੰਗਰੇਜ਼ੀ ਅਨੁਵਾਦ ਹੈ:-

Question ID : 63068045519
Status : Answered
Chosen Option : 2

- Ans
- 1. Document proofs are important
 - 2. Documentary proofs is important
 - 3. Documentary proofs are important
 - 4. Documentary proof are important

Q.93 Select the grammatically correct sentence from the following options.

Question ID : 63068034861
Status : Not Attempted and Marked For Review
Chosen Option : --

- Ans
- 1. The reason this is he didn't attend the meeting why.
 - 2. This is the reason why he didn't attend the meeting.
 - 3. Why he didn't attend the meeting is the reason.
 - 4. He didn't attend the meeting the reason this is.

Q.94 Select the option which correctly expresses the following sentence in passive form.

Question ID : 63068034829
Status : Answered
Chosen Option : 3

- Let us stay here.
- Ans
- 1. It is suggested that we should stay here.
 - 2. Let we shall stay here.
 - 3. It is said that we shall stay here.
 - 4. Let we should stay here.

Q.95 'ਆਉ ਖਾਣਾ ਖਾ ਲਉ' ਵਾਕ ਦਾ ਸਹੀ ਅੰਗਰੇਜ਼ੀ ਅਨੁਵਾਦ ਹੈ:-

Question ID : 63068045523
Status : Answered
Chosen Option : 1

- Ans
- 1. Come and take food.
 - 2. Let's takes food.
 - 3. Let's take food.
 - 4. Come eat food.

Comprehension:

Read the passage carefully and choose the appropriate option of the given questions.

Question ID : 63068035288
Status : Not Attempted and Marked For Review
Chosen Option : --

A stamp is, to many people, just a slip of paper that takes a letter from one town or country to another. They are unable to understand why we stamp collectors find so much pleasure in collecting them and how we find time in which to indulge in our hobby. They regard stamp-collecting as a waste of time, a waste of effort and a waste of money. But there are many people who love to buying stamps and find this hobby worthwhile and more profitable than other leisure pursuits. Collecting stamps helps to pass the time quickly and pleasantly. A Stamp-collector has to consider certain aspects before collecting stamps. He has to decide what kind of stamps he want to collect because there are various types of stamps such as commemorative stamps honoring a person event or subject, definitive stamps describing general geography, important and famous place of a country and Special stamps based on festivals and any celebration. Another criterion of collection is to focus on a specific type aspect like worldwide, country or choosing a particular topic like birds, animals flowers etc. Stamps can be purchased from local post office or taking help from local stamp club. Stamps can be stored in an album or on loose leaf paper in a binder by using hinges, or glassine strips.

Stamp -collecting has no limits and a collection never has an end; countries are printing and issuing new stamps to celebrate coronations, great events, anniversaries and deaths. Every sphere of stamp - collecting has its fascination - receiving letters from distant countries and discovering old stamps in the leaves of dusty books. A stamp itself has a fascination all its own. Gazing at its little picture we are transported to the wilds of Congo, the homes of the Arabs, and the endless tracks of Sahara Desert. There is history in every stamp. The ancient Roman Empire and the Constitution of America, India's Independence and the Allied victory, are all conveyed to our mind's eye by means of stamps. We see famous men, women, pictures, scientists, soldiers, politicians and famous incidents of the country. Stamps, so small and minute, contain vast and important knowledge. Each stamp illuminates the story of its country by design, print, edition on it.

SubQuestion No : 96

Q.96 People who don't collect stamps, consider it as

- Ans
- 1. a thing to be preserved
 - 2. not necessary for sending a letter
 - 3. a hobby
 - 4. just a slip of paper

Comprehension:

Read the passage carefully and choose the appropriate option of the given questions.

Question ID : 63068035289
Status : Not Attempted and Marked For Review
Chosen Option : --

A stamp is, to many people, just a slip of paper that takes a letter from one town or country to another. They are unable to understand why we stamp collectors find so much pleasure in collecting them and how we find time in which to indulge in our hobby. They regard stamp-collecting as a waste of time, a waste of effort and a waste of money. But there are many people who love to buying stamps and find this hobby worthwhile and more profitable than other leisure pursuits. Collecting stamps helps to pass the time quickly and pleasantly. A Stamp-collector has to consider certain aspects before collecting stamps. He has to decide what kind of stamps he want to collect because there are various types of stamps such as commemorative stamps honoring a person event or subject, definitive stamps describing general geography, important and famous place of a country and Special stamps based on festivals and any celebration. Another criterion of collection is to focus on a specific type aspect like worldwide, country or choosing a particular topic like birds, animals flowers etc. Stamps can be purchased from local post office or taking help from local stamp club. Stamps can be stored in an album or on loose leaf paper in a binder by using hinges, or glassine strips.

Stamp -collecting has no limits and a collection never has an end; countries are printing and issuing new stamps to celebrate coronations, great events, anniversaries and deaths. Every sphere of stamp - collecting has its fascination - receiving letters from distant countries and discovering old stamps in the leaves of dusty books. A stamp itself has a fascination all its own. Gazing at its little picture we are transported to the wilds of Congo, the homes of the Arabs, and the endless tracks of Sahara Desert. There is history in every stamp. The ancient Roman Empire and the Constitution of America, India's Independence and the Allied victory, are all conveyed to our mind's eye by means of stamps. We see famous men, women, pictures, scientists, soldiers, politicians and famous incidents of the country. Stamps, so small and minute, contain vast and important knowledge. Each stamp illuminates the story of its country by design, print, edition on it.

SubQuestion No : 97

Q.97 A stamp collector should consider certain points before collecting stamps

- Ans
- 1. kind of stamps
 - 2. Expensive stamps
 - 3. stamps focusing a topic
 - 4. storage of stamps

Comprehension:

Read the passage carefully and choose the appropriate option of the given questions.

A stamp is, to many people, just a slip of paper that takes a letter from one town or country to another. They are unable to understand why we stamp collectors find so much pleasure in collecting them and how we find time in which to indulge in our hobby. They regard stamp-collecting as a waste of time, a waste of effort and a waste of money. But there are many people who love to buy stamps and find this hobby worthwhile and more profitable than other leisure pursuits. Collecting stamps helps to pass the time quickly and pleasantly. A Stamp-collector has to consider certain aspects before collecting stamps. He has to decide what kind of stamps he wants to collect because there are various types of stamps such as commemorative stamps honoring a person event or subject, definitive stamps describing general geography, important and famous place of a country and Special stamps based on festivals and any celebration. Another criterion of collection is to focus on a specific type aspect like worldwide, country or choosing a particular topic like birds, animals flowers etc. Stamps can be purchased from local post office or taking help from local stamp club. Stamps can be stored in an album or on loose leaf paper in a binder by using hinges, or glassine strips.

Stamp-collecting has no limits and a collection never has an end; countries are printing and issuing new stamps to celebrate coronations, great events, anniversaries and deaths. Every sphere of stamp-collecting has its fascination - receiving letters from distant countries and discovering old stamps in the leaves of dusty books. A stamp itself has a fascination all its own. Gazing at its little picture we are transported to the wilds of Congo, the homes of the Arabs, and the endless tracks of Sahara Desert. There is history in every stamp. The ancient Roman Empire and the Constitution of America, India's Independence and the Allied victory, are all conveyed to our mind's eye by means of stamps. We see famous men, women, pictures, scientists, soldiers, politicians and famous incidents of the country. Stamps, so small and minute, contain vast and important knowledge. Each stamp illuminates the story of its country by design, print, edition on it.

SubQuestion No : 98**Q.98** What is the equipment help in storage of stamps?

- Ans**
- 1. Hinges
 - 2. Stamp club
 - 3. Post office
 - 4. Book leaves

Question ID : 63068035290

Status : **Not Attempted and Marked For Review**

Chosen Option : --

Comprehension:

Read the passage carefully and choose the appropriate option of the given questions.

A stamp is, to many people, just a slip of paper that takes a letter from one town or country to another. They are unable to understand why we stamp collectors find so much pleasure in collecting them and how we find time in which to indulge in our hobby. They regard stamp-collecting as a waste of time, a waste of effort and a waste of money. But there are many people who love to buy stamps and find this hobby worthwhile and more profitable than other leisure pursuits. Collecting stamps helps to pass the time quickly and pleasantly. A Stamp-collector has to consider certain aspects before collecting stamps. He has to decide what kind of stamps he wants to collect because there are various types of stamps such as commemorative stamps honoring a person event or subject, definitive stamps describing general geography, important and famous place of a country and Special stamps based on festivals and any celebration. Another criterion of collection is to focus on a specific type aspect like worldwide, country or choosing a particular topic like birds, animals flowers etc. Stamps can be purchased from local post office or taking help from local stamp club. Stamps can be stored in an album or on loose leaf paper in a binder by using hinges, or glassine strips.

Stamp-collecting has no limits and a collection never has an end; countries are printing and issuing new stamps to celebrate coronations, great events, anniversaries and deaths. Every sphere of stamp-collecting has its fascination - receiving letters from distant countries and discovering old stamps in the leaves of dusty books. A stamp itself has a fascination all its own. Gazing at its little picture we are transported to the wilds of Congo, the homes of the Arabs, and the endless tracks of Sahara Desert. There is history in every stamp. The ancient Roman Empire and the Constitution of America, India's Independence and the Allied victory, are all conveyed to our mind's eye by means of stamps. We see famous men, women, pictures, scientists, soldiers, politicians and famous incidents of the country. Stamps, so small and minute, contain vast and important knowledge. Each stamp illuminates the story of its country by design, print, edition on it.

SubQuestion No : 99**Q.99** The word 'transported' in the second paragraph of passage means

- Ans**
- 1. To send stamps from one place to another
 - 2. To visually imagine to be at the given places
 - 3. To carry from one place to another by vehicle
 - 4. To go for stamp collection at other places

Question ID : 63068035291

Status : **Not Answered**

Chosen Option : --

Comprehension:

Read the passage carefully and choose the appropriate option of the given questions.

A stamp is, to many people, just a slip of paper that takes a letter from one town or country to another. They are unable to understand why we stamp collectors find so much pleasure in collecting them and how we find time in which to indulge in our hobby. They regard stamp-collecting as a waste of time, a waste of effort and a waste of money. But there are many people who love to buy stamps and find this hobby worthwhile and more profitable than other leisure pursuits. Collecting stamps helps to pass the time quickly and pleasantly. A Stamp-collector has to consider certain aspects before collecting stamps. He has to decide what kind of stamps he wants to collect because there are various types of stamps such as commemorative stamps honoring a person event or subject, definitive stamps describing general geography, important and famous place of a country and Special stamps based on festivals and any celebration. Another criterion of collection is to focus on a specific type aspect like worldwide, country or choosing a particular topic like birds, animals flowers etc. Stamps can be purchased from local post office or taking help from local stamp club. Stamps can be stored in an album or on loose leaf paper in a binder by using hinges, or glassine strips.

Stamp-collecting has no limits and a collection never has an end; countries are printing and issuing new stamps to celebrate coronations, great events, anniversaries and deaths. Every sphere of stamp-collecting has its fascination - receiving letters from distant countries and discovering old stamps in the leaves of dusty books. A stamp itself has a fascination all its own. Gazing at its little picture we are transported to the wilds of Congo, the homes of the Arabs, and the endless tracks of Sahara Desert. There is history in every stamp. The ancient Roman Empire and the Constitution of America, India's Independence and the Allied victory, are all conveyed to our mind's eye by means of stamps. We see famous men, women, pictures, scientists, soldiers, politicians and famous incidents of the country. Stamps, so small and minute, contain vast and important knowledge. Each stamp illuminates the story of its country by design, print, edition on it.

SubQuestion No : 100**Q.100** Which parameter of a stamp is not used to describe the story of a nation?

- Ans**
- 1. Quantity
 - 2. Edition
 - 3. Print
 - 4. Design

Question ID : 63068035292

Status : **Not Answered**

Chosen Option : --

Visit Website - [Click Here](#)